




Oxford Cambridge and RSA

**Friday 10 June 2022 – Afternoon**

**A Level Physics A**

**H556/02 Exploring physics**

**Time allowed: 2 hours 15 minutes**



**You must have:**

- the Data, Formulae and Relationships booklet

**You can use:**

- a scientific or graphical calculator
- a ruler (cm/mm)



Please write clearly in black ink. **Do not write in the barcodes.**

Centre number

--	--	--	--	--

Candidate number

--	--	--	--

First name(s)

---

Last name

---

**INSTRUCTIONS**

- Use black ink. You can use an HB pencil, but only for graphs and diagrams.
- Write your answer to each question in the space provided. If you need extra space use the lined pages at the end of this booklet. The question numbers must be clearly shown.
- Answer **all** the questions.
- Where appropriate, your answer should be supported with working. Marks might be given for using a correct method, even if your answer is wrong.

**INFORMATION**

- The total mark for this paper is **100**.
- The marks for each question are shown in brackets [ ].
- Quality of extended response will be assessed in questions marked with an asterisk (\*).
- This document has **28** pages.

**ADVICE**

- Read each question carefully before you start your answer.

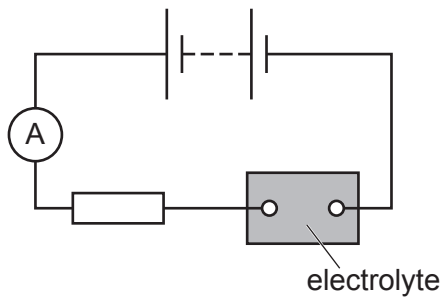
2  
SECTION A

You should spend a maximum of 30 minutes on this section.

Write your answer to each question in the box provided.

Answer **all** the questions.

- 1 A current is present in the circuit below.



The resistor is made from a length of wire.

Which row gives the correct charge carriers in the resistor and in the electrolyte?

	Charge carriers in the resistor	Charge carriers in the electrolyte
<b>A</b>	Electrons	Electrons
<b>B</b>	Electrons	Ions
<b>C</b>	Electrons and protons	Ions and electrons
<b>D</b>	Electrons and ions	Ions and protons

Your answer

[1]

- 2 The half-life of fluorine-18 isotope is  $T$ .  
After time  $t = 4T$  the number of fluorine-18 nuclei in a source is  $N$ .

How many fluorine-18 nuclei have decayed in the time interval from  $t = 0$  to  $t = 4T$ ?

- A**  $3N$
- B**  $4N$
- C**  $15N$
- D**  $16N$

Your answer

[1]

- 3 The activity of an alpha-emitting source is 120 kBq. The kinetic energy of each alpha-particle is 4.0 MeV.

What is the rate of energy released by the source?

- A  $6.4 \times 10^{-13} \text{ W}$
- B  $4.8 \times 10^{-8} \text{ W}$
- C  $7.7 \times 10^{-8} \text{ W}$
- D  $1.2 \times 10^5 \text{ W}$

Your answer

[1]

- 4 Which of the following statement(s) correctly describe radioactive decay?

- 1 Radioactive decay can be modelled using dice.
- 2 Radioactive decay of nuclei is random.
- 3 Radioactive decay of nuclei is spontaneous.

- A Only 1
- B Only 2
- C 2 and 3
- D 1, 2 and 3

Your answer

[1]

- 5 A gamma-ray photon of frequency  $6.76 \times 10^{22} \text{ Hz}$  creates a particle-antiparticle pair. The particle-antiparticle pair have zero kinetic energy.

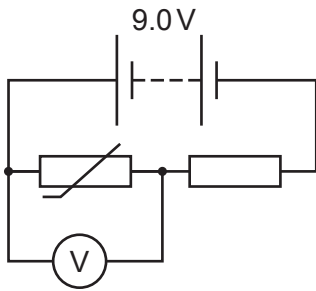
What is the mass of the particle?

- A  $2.49 \times 10^{-28} \text{ kg}$
- B  $4.98 \times 10^{-28} \text{ kg}$
- C  $7.47 \times 10^{-20} \text{ kg}$
- D  $4.48 \times 10^{-11} \text{ kg}$

Your answer

[1]

- 6 A potential divider circuit is shown below.



The battery has electromotive force (e.m.f.) 9.0V and negligible internal resistance.  
 At room temperature the potential difference (p.d.) across the thermistor is 4.5V.  
 The temperature of the thermistor is increased and its resistance decreases by 20% from its previous value.

What is the p.d. across the thermistor now?

- A 3.6V
- B 4.0V
- C 5.0V
- D 5.4V

Your answer

[1]

- 7 A particle is moving at right angles to a uniform magnetic field of flux density  $B$ . The particle has mass  $m$ , charge  $q$  and moves in a circular arc of radius  $r$  in the region of the magnetic field.

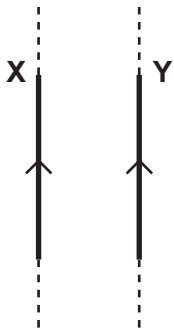
What quantities are required to determine the momentum of this particle?

- A  $B$ ,  $q$  and  $r$
- B  $B$ ,  $q$  and  $m$
- C  $B$ ,  $q$ ,  $r$  and  $m$
- D  $q$ ,  $r$  and  $m$

Your answer

[1]

- 8 The diagram below shows two long current-carrying conductors **X** and **Y**.



The conductors are parallel to each other.

**Y** experiences a force because it is in the magnetic field of **X**.

Which row gives the correct direction of the magnetic field at **Y** due to **X**, and the direction of the force experienced by **Y** due to this field?

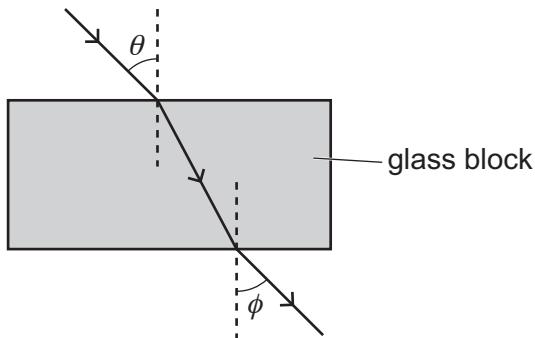
	Direction of magnetic field	Direction of force
<b>A</b>	Down into the plane of paper	To the right
<b>B</b>	Up from the plane of paper	To the right
<b>C</b>	Down into the plane of paper	To the left
<b>D</b>	Up from the plane of paper	To the left

Your answer

[1]

- 9 A student is investigating the refraction of light by a rectangular glass block. The glass block is surrounded by air.

The diagram below shows the path of the light as it enters the block, when it is refracted within the block and when it exits the block.



Which statement is correct?

- A The angles  $\theta$  and  $\phi$  are the same because the glass block is surrounded by air.
- B The product of  $\sin \theta$  and the refractive index of glass is a constant.
- C The refractive index of glass is less than the refractive index of air.
- D The speed of light is the same in both air and glass.

Your answer

[1]

- 10 A proton of mass  $1.67 \times 10^{-27}$  kg is travelling at a speed of  $2.0 \times 10^5$  m s<sup>-1</sup>.

The table below shows the mass and speed of four particles **A**, **B**, **C** and **D**.

Particle	Mass/kg	Speed/ $10^5$ m s <sup>-1</sup>
<b>A</b>	$9.11 \times 10^{-30}$	5.0
<b>B</b>	$8.80 \times 10^{-28}$	3.0
<b>C</b>	$2.49 \times 10^{-28}$	2.0
<b>D</b>	$3.34 \times 10^{-27}$	1.0

Which particle has the same de Broglie wavelength as the proton?

Your answer

[1]

- 11 A beam of sound of intensity  $I_0$  is reflected off the surface of water.  
The amplitude of the reflected sound is  $\frac{1}{4}$  the amplitude of the incident sound.

What is the intensity of the reflected sound in terms of  $I_0$ ?

- A  $\frac{I_0}{16}$   
B  $\frac{I_0}{8}$   
C  $\frac{I_0}{4}$   
D  $I_0$

Your answer

[1]

- 12 A small sample of muscle has volume  $1.0 \text{ cm}^3$  and mass  $1.10 \text{ g}$ .  
The speed of ultrasound in the muscle is  $1600 \text{ m s}^{-1}$ .

What is the acoustic impedance of the muscle?

- A  $1.76 \times 10^3 \text{ kg m}^{-2} \text{ s}^{-1}$   
B  $1.76 \times 10^4 \text{ kg m}^{-2} \text{ s}^{-1}$   
C  $1.76 \times 10^6 \text{ kg m}^{-2} \text{ s}^{-1}$   
D  $1.76 \times 10^{12} \text{ kg m}^{-2} \text{ s}^{-1}$

Your answer

[1]

- 13 The mass of a proton is  $m_p$ , the mass of a neutron is  $m_n$ , and the mass of a hydrogen-3 ( ${}^3_1\text{H}$ ) nucleus is  $M$ . The speed of light in a vacuum is  $c$ .

Which expression is correct for the binding energy (B.E.) of the hydrogen-3 nucleus?

- A B.E. =  $M \times c^2$   
B B.E. =  $(m_n + m_p - M) \times c^2$   
C B.E. =  $(m_n + 2m_p - M) \times c^2$   
D B.E. =  $(2m_n + m_p - M) \times c^2$

Your answer

[1]

14 A wire in a circuit obeys Ohm's law.

Which statement about the wire is linked to this law?

- A The current in the wire is directly proportional to the potential difference across it.
- B The current in the wire is inversely proportional to its resistance.
- C The resistance of the wire is directly proportional to its length.
- D The resistance of the wire is inversely proportional to its cross-sectional area.

Your answer

[1]

15 An electron has both mass and charge. The electron has a gravitational field and an electric field around it.

Which statement is **not** correct?

- A Both field patterns look the same.
- B Both field patterns show parallel field lines around the electron.
- C Both field strengths obey an inverse square law with distance from the electron.
- D The direction of both fields is the same at any point around the electron.

Your answer

[1]



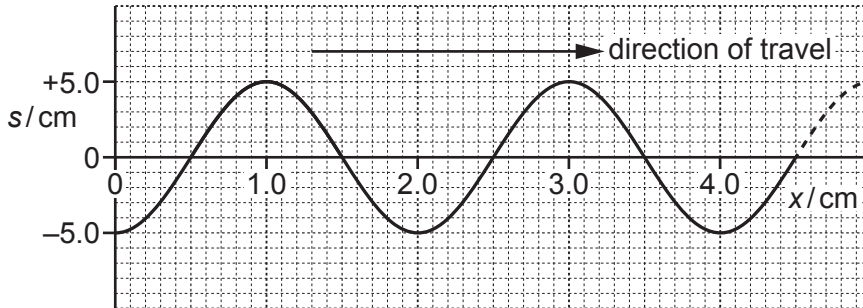
**BLANK PAGE**

**PLEASE DO NOT WRITE ON THIS PAGE**

SECTION B

Answer **all** the questions.

- 16 (a) A graph of displacement  $s$  against distance  $x$  for a **progressive** wave at time  $t = 0$  is shown below.



Determine:

- (i) the phase difference  $\phi$  in radians between the points on the wave at  $x = 1.5\text{ cm}$  and  $x = 2.5\text{ cm}$

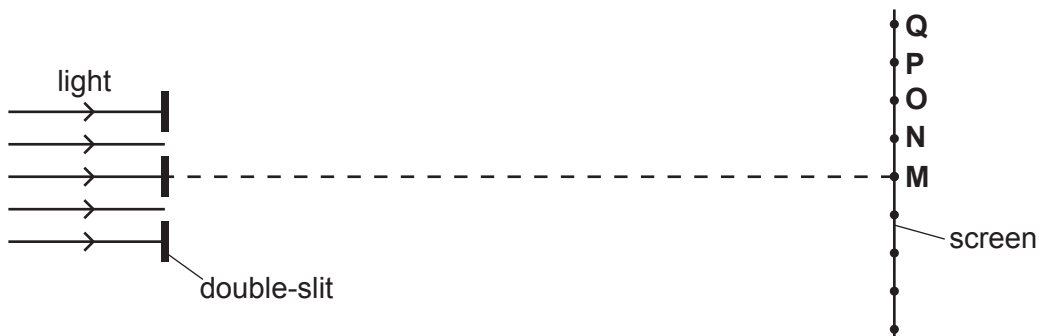
$\phi = \dots\dots\dots$  rad [1]

- (ii) the displacement  $s$  at time  $t = \frac{3}{4} T$  at  $x = 1.5\text{ cm}$ , where  $T$  is the period of the oscillations of the wave.

$s = \dots\dots\dots$  cm [1]

- (b) A beam of coherent light of wavelength  $\lambda$  is incident normally at two parallel slits (double-slit). A series of bright and dark fringes are formed on a distant screen placed parallel to the line joining the slits.

The location of some of these fringes is shown in **Fig. 16.1**.



**Fig. 16.1 (not to scale)**

The bright fringes are seen at points **M**, **O** and **Q**. The dark fringes are seen at points **N** and **P**.

State the phase difference  $\phi$  in degrees, and the path difference  $d$  in terms of wavelength  $\lambda$ , for the waves from the two slits meeting at point **P**.

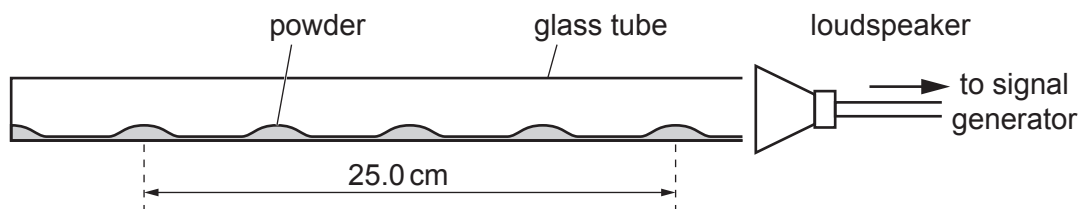
$\phi = \dots\dots\dots^\circ$  [1]

$d = \dots\dots\dots\lambda$  [1]

- (c) A student is doing an experiment to determine the speed of sound in air by producing stationary waves inside a horizontal glass tube.

Fine powder is sprinkled inside the tube. A loudspeaker is placed close to the open end of the tube. The other end of the tube is closed. The loudspeaker is connected to a signal generator producing a frequency of 2.72 kHz.

The powder inside the tube forms piles at certain locations inside the tube, see **Fig. 16.2**.



**Fig. 16.2 (not to scale)**

- (i) Suggest why the powder piles up at the nodes within the tube.

.....  
 ..... [1]

- (ii) Use **Fig. 16.2** to determine the speed of sound  $v$ .

$$v = \dots\dots\dots \text{ms}^{-1} \quad [3]$$

- (iii) Determine the fundamental (minimum) frequency  $f_0$  of the stationary wave that can be formed within this tube.

$$f_0 = \dots\dots\dots \text{Hz} \quad [2]$$

17 A light-emitting diode (LED) can be used to determine the Planck constant  $h$ . When the LED just starts to emit light, the equation below is valid

$$eV = \frac{hc}{\lambda}$$

where  $V$  is the potential difference (p.d.) across the LED,  $\lambda$  is the wavelength of the light emitted,  $c$  is the speed of light in vacuum and  $e$  is the elementary charge.

(a) In the equation above,  $\frac{hc}{\lambda}$  is the energy of a photon emitted from the LED.

Determine the S.I. base units for  $h$ .

base units = ..... [2]

(b)\* Describe how an experiment can be carried out in the laboratory to determine  $h$  from a graph. Your description must include how  $V$  and  $\lambda$  are accurately determined. Assume that the values of  $e$  and  $c$  are known. [6]

.....

.....

.....

.....

.....

.....

.....

.....

.....

.....

.....

.....

.....

.....

.....

.....

.....

.....

.....

.....

.....

.....

.....

.....

.....

Additional answer space if required

.....

.....

.....

.....

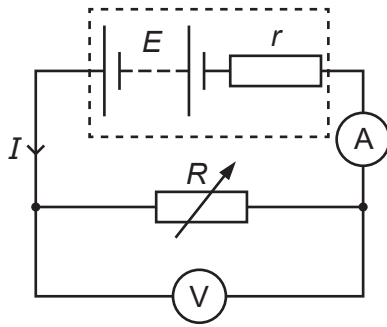
.....

.....

.....

.....

- 18 A battery is connected to a variable resistor.



The variable resistor is made from a length of wire. The resistance of the variable resistor is  $R$ . The battery has electromotive force (e.m.f.)  $E$  and internal resistance  $r$ . The current in the circuit is  $I$ .

- (a) Compare the e.m.f. of the battery and the potential difference (p.d.) across the variable resistor in terms of energy transfers or changes.

.....  
 ..... [1]

- (b) State which physical quantity of the variable resistor is changed to alter its resistance.

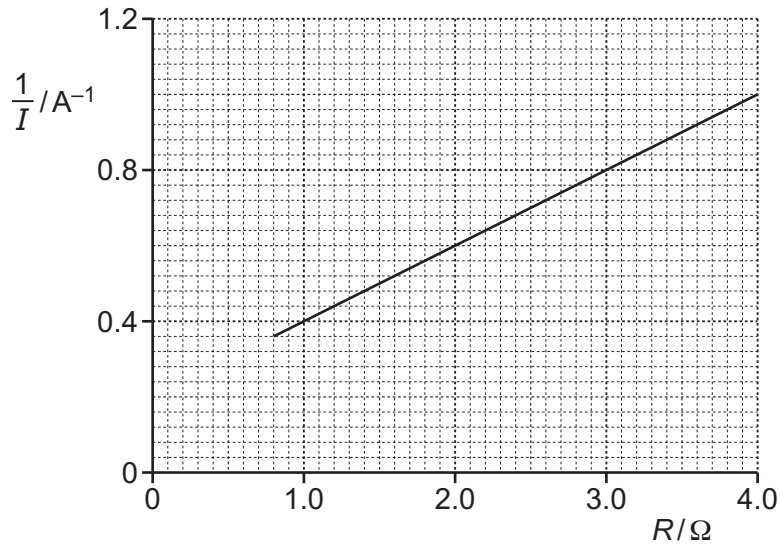
..... [1]

- (c) A student connects up the circuit above to determine  $r$ .

(i) Show that  $\frac{1}{I} = \frac{R}{E} + \frac{r}{E}$ .

[2]

- (ii) The student varies  $R$  and measures the current  $I$ .  
 The student plots a graph of  $\frac{1}{I}$  against  $R$ .



- 1 Use the graph to determine the power dissipated in the variable resistor when  $R = 3.0 \Omega$ .

power = ..... W [2]

- 2 The e.m.f.  $E$  of the battery is 5.0V.

Determine  $r$  from the intercept of the line with the vertical axis.

$r = \dots \dots \dots \Omega$  [2]

- 19 The diagram below shows two parallel plates, **E** and **C**, in an evacuated glass tube.

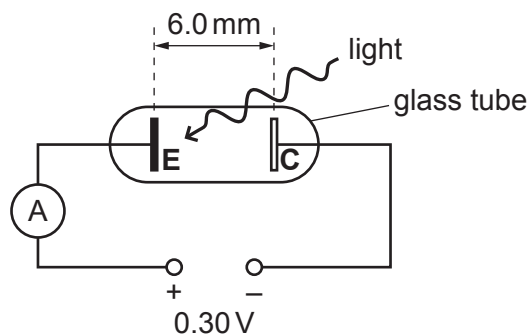


Plate **E** is made from potassium, which is sensitive to light. Plate **C** is not sensitive to light.

The separation between the plates is 6.0 mm and the potential difference between the plates is 0.30 V.

Light of frequency  $6.3 \times 10^{14}$  Hz is incident on plate **E**. The photoelectrons emitted from this plate have **maximum** kinetic energy 0.30 eV ( $4.8 \times 10^{-20}$  J). The photoelectrons are repelled by the negative plate **C**. The ammeter reading is zero because these photoelectrons reach plate **C** with zero kinetic energy.

- (a) Calculate the work function of potassium in eV.

work function = ..... eV [3]

- (b) This question is about a photoelectron emitted perpendicular to plate **E** and with an initial kinetic energy of  $4.8 \times 10^{-20}$  J.

- (i) Show that the magnitude of deceleration of this photoelectron is  $8.8 \times 10^{12} \text{ m s}^{-2}$ .

[3]



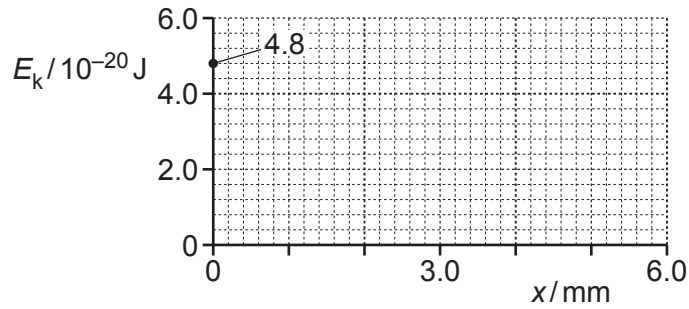
(ii) Show that the initial speed of the photoelectron is about  $3 \times 10^5 \text{ ms}^{-1}$ .

[2]

(iii) Calculate the time  $t$  taken by the photoelectron to travel from plate **E** to plate **C**.

$t = \dots\dots\dots \text{ s}$  [2]

(iv) Using the axes shown below, sketch a graph of kinetic energy  $E_k$  against distance  $x$  from plate **E**.



[2]

(c) Explain, in terms of photons, what happens to the ammeter reading when light of frequency greater than  $6.3 \times 10^{14} \text{ Hz}$  is now incident on plate **E**.

.....  
 .....  
 ..... [2]



.....

.....

.....

.....

.....

Additional answer space if required

.....

.....

.....

.....

.....

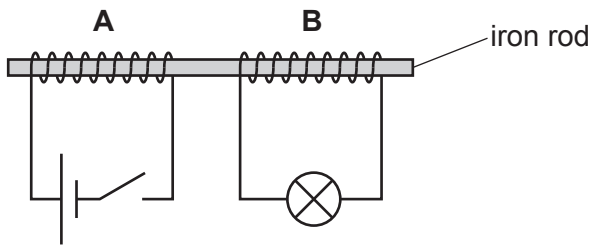
.....

.....

.....

.....

21 (a) The diagram below shows two insulated-copper coils **A** and **B** connected in circuits.



Both coils are individually wrapped around the same iron rod.  
Coil **A** is connected to a cell and a switch. Coil **B** is connected to a filament lamp.

The switch is initially closed and the lamp is off.

The switch is then opened. The lamp flashes on for a brief time, and then remains off.

Explain these observations in terms of magnetic flux.

.....

.....

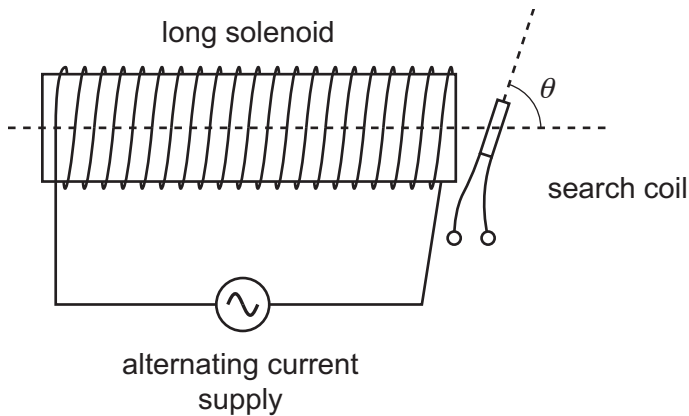
.....

.....

.....

..... [3]

(b) A student is carrying out an experiment using a search coil.



A long solenoid is connected to an alternating current supply.

The search coil is placed at one end of the solenoid. The plane of the search coil is tilted such that it makes an angle  $\theta$  with the central axis of the solenoid. The maximum alternating induced electromotive force (e.m.f.) across the ends of the search coil is  $E_0$ .

(i) Name an instrument that can be used to determine  $E_0$ .

..... [1]

(ii) The equation for  $E_0$  is:

$$E_0 = KI_0ANf \sin \theta$$

where  $I_0$  = maximum current in the solenoid,  $A$  = cross-sectional area of the search coil,  $N$  = number of turns of the search coil,  $f$  = frequency of the alternating current in the solenoid and  $K = 4.0 \times 10^{-3} \text{ VA}^{-1} \text{ m}^{-2} \text{ s}$ .

The magnitude of the induced e.m.f. in the search coil can be determined using Faraday's law of electromagnetic induction:

e.m.f. = rate of change of magnetic flux linkage

In the experiment, angle  $\theta$  is changed and  $E_0$  measured.

Suggest the quantity, or quantities, in the equation  $E_0 = KI_0ANf \sin \theta$  linked to

1 the 'rate' part of the law

..... [1]

2 the 'change of magnetic flux linkage' part of the law.

..... [1]

(iii) The student plots a straight-line graph of  $E_0$  against  $\sin \theta$ .

Determine  $f$ , including the absolute uncertainty. Write your value of  $f$  to **2** significant figures.

$$I_0 = (8.0 \pm 0.2) \text{ A}$$

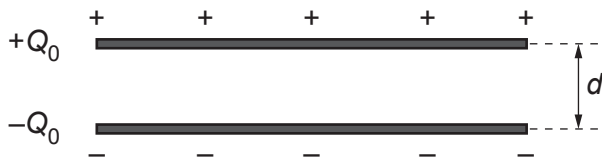
$$A = (7.8 \pm 0.1) \times 10^{-5} \text{ m}^2$$

$$N = 5000$$

$$\text{gradient of line} = KI_0ANf = (0.62 \pm 0.03) \text{ V}$$

$$f = \dots \pm \dots \text{ Hz [4]}$$

22 (a) The diagram below shows a simple capacitor.



The capacitor consists of two horizontal metal plates in a vacuum. The magnitude of the charge on each plate is  $Q_0$ . The potential difference (p.d.) between the plates is  $V_0$ . The capacitor plates have capacitance  $C_0$ . The separation between the plates is  $d$ . The energy stored by the capacitor is  $E_0$ .

The top plate is moved vertically upwards. The new separation between the plates is  $2d$ . The charge on each plate remains the **same**. The energy stored by the capacitor **increases**.

(i) Determine the new:

1 capacitance in terms of  $C_0$

capacitance = .....  $C_0$  [1]

2 p.d. between the plates in terms of  $V_0$

p.d. = .....  $V_0$  [1]

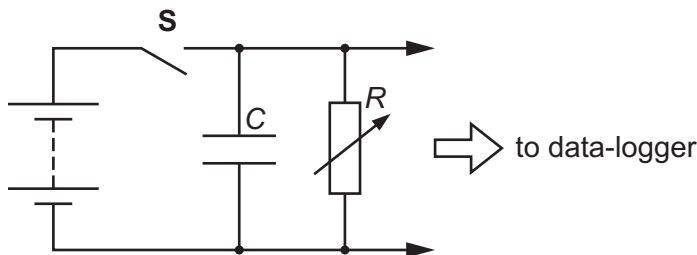
3 energy stored in terms of  $E_0$ .

energy = .....  $E_0$  [1]

(ii) Explain, in terms of forces between the plates, why the energy stored increases.

.....  
 ..... [1]

(b) A student discharges a capacitor of capacitance  $C$  through a variable resistor of resistance  $R$  using the arrangement below.



The capacitor is made from two parallel metal plates separated by a sheet of paper of thickness  $8.0 \times 10^{-5}$  m. The area of overlap between the plates is  $3.1 \times 10^{-2}$  m<sup>2</sup>.

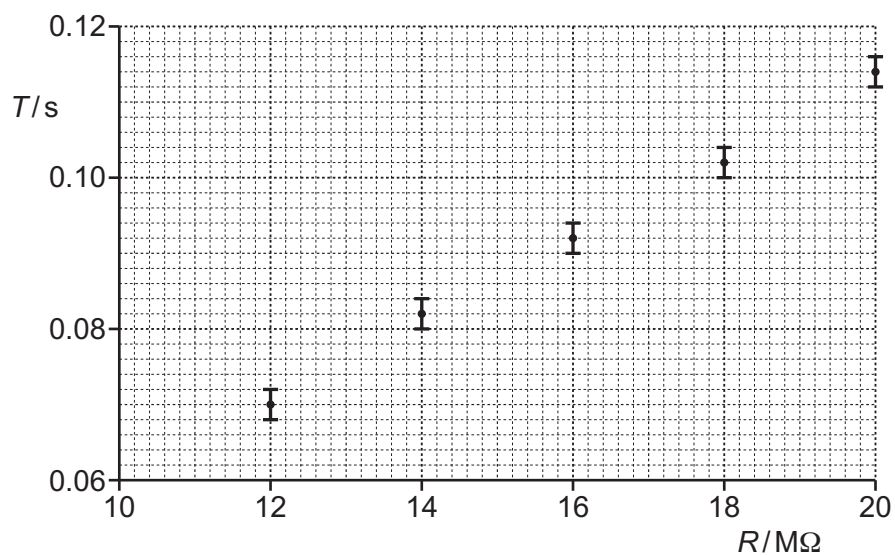
The capacitor is charged fully by closing switch **S**. At time  $t = 0$ , **S** is opened and the capacitor discharges through the resistor. After  $t = T$ , the potential difference across the capacitor is halved. The student repeats this for several values of  $R$ .

- (i) The student decides to plot  $T$  against  $R$  to obtain a straight-line graph.

Show that the line has gradient =  $C \ln 2$ .

[2]

- (ii) The data points plotted by the student are shown below.



- 1 Draw a best-fit straight line through the data points and use the gradient of this line to determine  $C$ .

$C = \dots\dots\dots$  F [3]

- 2 Use your answer in (ii)1 to calculate the permittivity  $\epsilon$  of the paper.

$\epsilon = \dots\dots\dots$  F m<sup>-1</sup> [2]

**24**  
**BLANK PAGE**

**PLEASE DO NOT WRITE ON THIS PAGE**



23 A gamma camera has several important components including a collimator, scintillator and photomultiplier tubes.

(a) Suggest why the collimator needs to be long and narrow.

.....  
..... [1]

(b) State the function of the scintillator.

.....  
..... [1]

(c) In a single photomultiplier tube, a photon of light produces a  $0.32\mu\text{A}$  pulse of current for a duration of 1.2 ns.

Calculate the number of electrons responsible for this pulse of current.

number of electrons = ..... [2]

(d) State one diagnostic application of a gamma camera.

.....  
..... [1]

**Question 24 is on the next page**

24 (a) Describe, in terms of X-ray photons, the attenuation mechanism of Compton scattering.

.....

.....

..... [2]

(b) A parallel beam of X-rays is incident normally on a tissue as shown in Fig. 24.1.

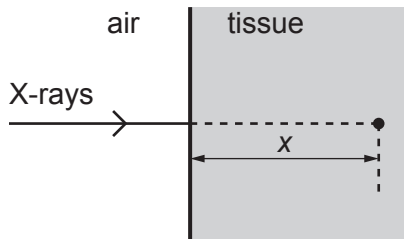


Fig. 24.1

The variation of the intensity  $I$  of the X-rays with depth  $x$  in the tissue is shown in Fig. 24.2.

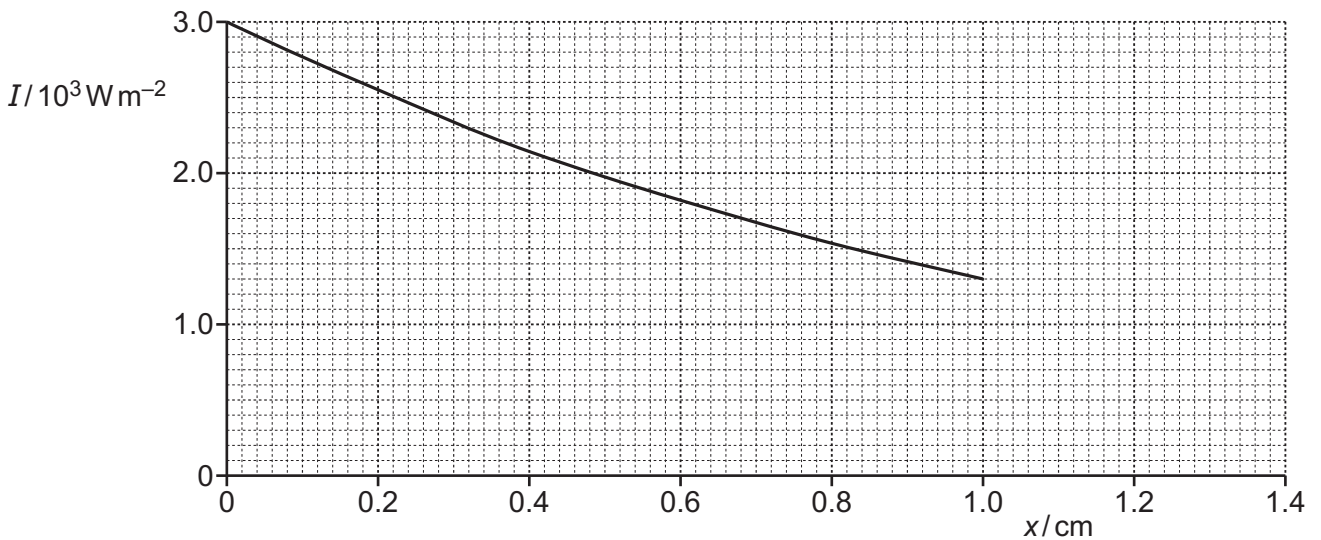


Fig. 24.2

The tissue has uniform structure between  $x = 0$  and  $x = 1.0$  cm.

(i) Use the graph to determine the attenuation (absorption) coefficient  $\mu$  in  $\text{cm}^{-1}$  of the tissue.

$\mu = \dots\dots\dots \text{cm}^{-1}$  [2]

- (ii) Use the graph to determine the exposure time  $t$  for the total radiant energy incident per  $\text{cm}^2$  at a depth of 1.0 cm to be 2.6 J.

$t = \dots\dots\dots$  s [3]

- (iii) Beyond  $x = 1.0$  cm, the tissue has a larger attenuation coefficient than the value calculated in (i).

On **Fig. 24.2**, sketch the variation of  $I$  with  $x$  beyond  $x = 1.0$  cm. [2]

**END OF QUESTION PAPER**

**ADDITIONAL ANSWER SPACE**

If additional space is required, you should use the following lined page(s). The question number(s) must be clearly shown in the margin(s).

A large rectangular area with a solid vertical line on the left side and horizontal dotted lines across the rest of the page, providing space for writing answers.



**Copyright Information**

OCR is committed to seeking permission to reproduce all third-party content that it uses in its assessment materials. OCR has attempted to identify and contact all copyright holders whose work is used in this paper. To avoid the issue of disclosure of answer-related information to candidates, all copyright acknowledgements are reproduced in the OCR Copyright Acknowledgements Booklet. This is produced for each series of examinations and is freely available to download from our public website ([www.ocr.org.uk](http://www.ocr.org.uk)) after the live examination series.

If OCR has unwittingly failed to correctly acknowledge or clear any third-party content in this assessment material, OCR will be happy to correct its mistake at the earliest possible opportunity.

For queries or further information please contact The OCR Copyright Team, The Triangle Building, Shaftesbury Road, Cambridge CB2 8EA.

OCR is part of Cambridge University Press & Assessment, which is itself a department of the University of Cambridge.