

Thursday 25 May 2023 – Morning

GCSE (9–1) Physics A (Gateway Science)

J249/01 Paper 1 (Foundation Tier)

Time allowed: 1 hour 45 minutes

You must have:

- a ruler (cm/mm)
- the Equation Sheet for GCSE (9–1) Physics A (inside this document)

You can use:

- a scientific or graphical calculator
- an HB pencil



Please write clearly in black ink. **Do not write in the barcodes.**

Centre number

| | | | | |
|--|--|--|--|--|
| | | | | |
|--|--|--|--|--|

Candidate number

| | | | |
|--|--|--|--|
| | | | |
|--|--|--|--|

First name(s)

Last name

INSTRUCTIONS

- Use black ink. You can use an HB pencil, but only for graphs and diagrams.
- Write your answer to each question in the space provided. If you need extra space use the lined pages at the end of this booklet. The question numbers must be clearly shown.
- Answer **all** the questions.
- Where appropriate, your answer should be supported with working. Marks might be given for a correct method, even if the answer is wrong.

INFORMATION

- The total mark for this paper is **90**.
- The marks for each question are shown in brackets [].
- Quality of extended response will be assessed in questions marked with an asterisk (*).
- This document has **24** pages.

ADVICE

- Read each question carefully before you start your answer.

Section A

You should spend a **maximum** of **30 minutes** on this section.

Write your answer to each question in the box provided.

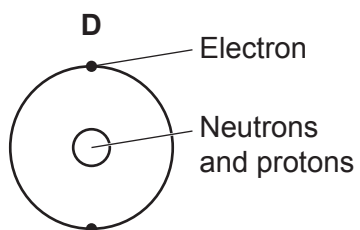
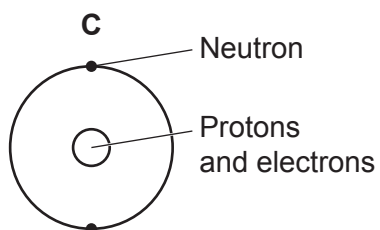
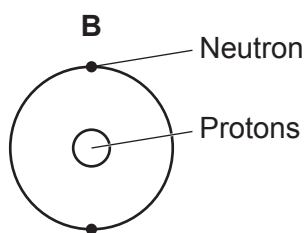
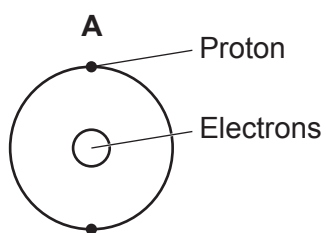
1 Which statement is an example of a chemical change?

- A Boiling milk
- B Freezing water
- C Frying an egg
- D Melting ice cream

Your answer

[1]

2 Which diagram shows the correct model of an atom?



Your answer

[1]

3 Which row describes the particles in a **gas**?

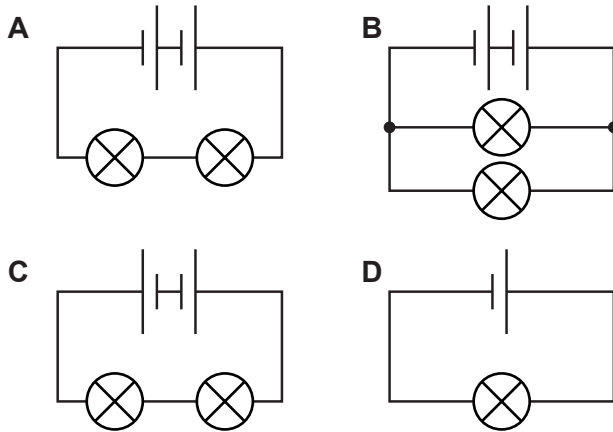
| | Distance between particles | Arrangement of particles |
|----------|----------------------------|--------------------------|
| A | close together | random |
| B | close together | regular |
| C | far apart | random |
| D | far apart | regular |

Your answer

[1]

4 A student connects four circuits using identical cells and identical lamps.

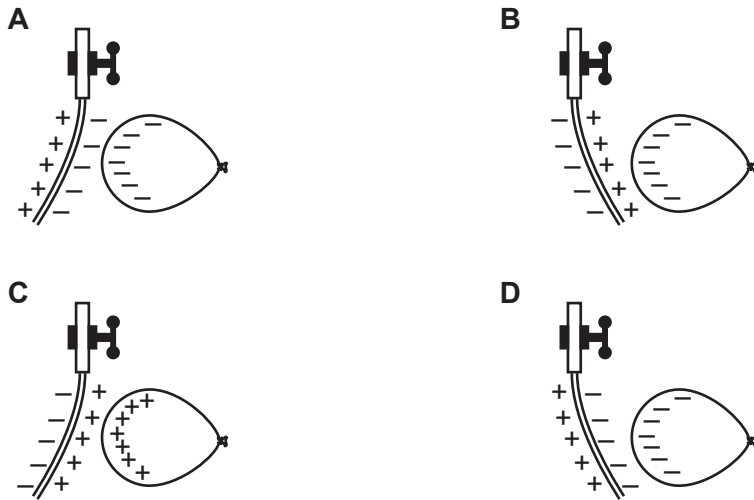
Which circuit has the **brightest** lamps?



Your answer

[1]

5 Which diagram correctly shows a charged balloon **attracting** a stream of water?



Your answer

[1]

6 The time taken for four students to run a race is recorded.

| Student | Time taken (s) |
|---------|----------------|
| 1 | 21.5 |
| 2 | 21.6 |
| 3 | 21.0 |
| 4 | 21.5 |

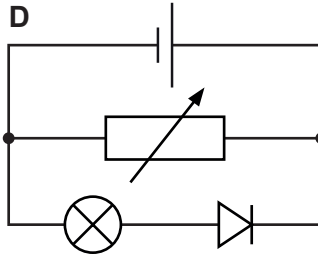
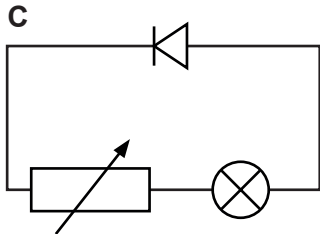
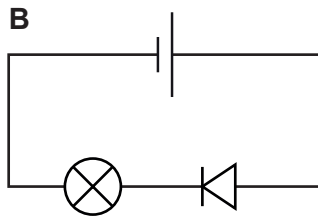
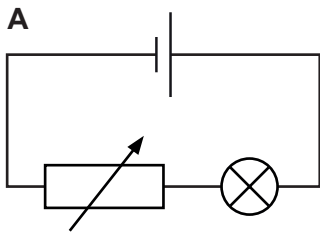
What is the mean time taken by the students?

- A 16.0s
- B 21.4s
- C 21.5s
- D 85.6s

Your answer

[1]

7 Which circuit diagram shows how the brightness of a lamp is changed using a variable resistor?

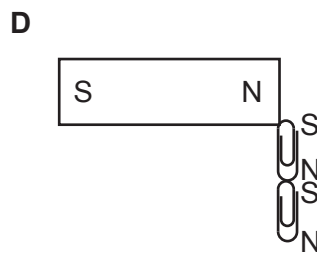
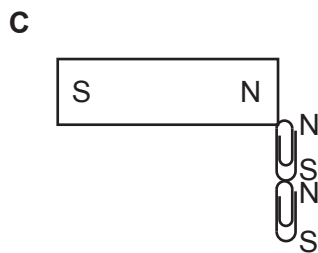
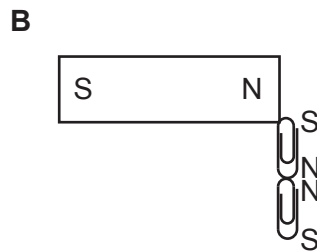
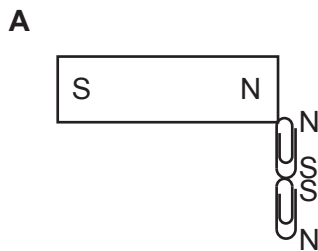


Your answer

[1]

8 A magnet attracts two paperclips. S represents a South pole and N represents a North pole.

Which diagram shows the correct magnetic poles of each paperclip?



Your answer

[1]

- 9 Which row states the correct term used for the rate of flow of charge and a condition for charge to flow in a circuit?

| | Rate of flow of charge | Condition for charge flow |
|----------|------------------------|---------------------------|
| A | current | closed circuit |
| B | current | open circuit |
| C | potential difference | open circuit |
| D | potential difference | closed circuit |

Your answer

[1]

- 10 In which of these situations is the **most** work done?

- A** 5 kg cat climbing 5 m vertically upwards
- B** 10 kg dog climbing 10 m vertically upwards
- C** 50 kg boy climbing 10 m vertically upwards
- D** 75 kg man climbing 5 m vertically upwards

Your answer

[1]

- 11 Specific latent heat is the energy transferred when 1 kg of a substance changes state.

Which row lists the correct change of state for specific latent heat of fusion and specific latent heat of vaporisation?

| | Specific latent heat of fusion | Specific latent heat of vaporisation |
|----------|--------------------------------|--------------------------------------|
| A | boiling | melting |
| B | condensing | boiling |
| C | freezing | condensing |
| D | melting | freezing |

Your answer

[1]

12 Which pair of resistors has the greatest total resistance?



Your answer

[1]

13 A student investigates the gears on their bicycle.

The larger cog has 60 teeth and the smaller cog has 20 teeth.

If the larger cog rotates once, how many times does the smaller cog rotate?

A 1

B 3

C 40

D 80

Your answer

[1]

14 The current in a wire is 5.0A.

What is the charge flow in the wire in 2 minutes?

Use the equation: charge flow = current \times time

A 0.40C

B 2.5C

C 10C

D 600C

Your answer

[1]

15 What is 15 J converted into newton-metres?

- A 0.15 Nm
- B 1.5 Nm
- C 15 Nm
- D 150 Nm

Your answer

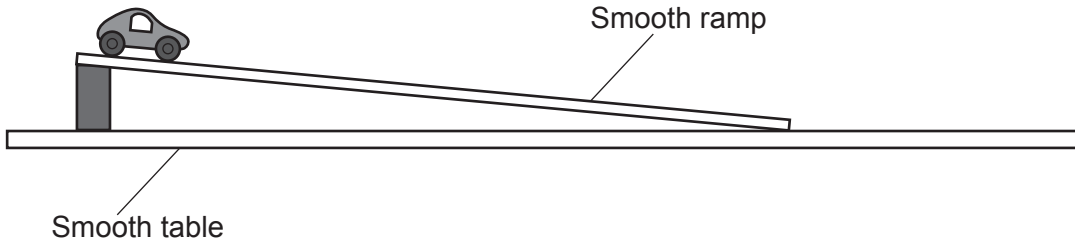
[1]

BLANK PAGE

PLEASE DO NOT WRITE ON THIS PAGE

10
Section B

- 16 The diagram shows a toy car rolling down a smooth ramp onto a smooth table where it travels at a constant velocity.



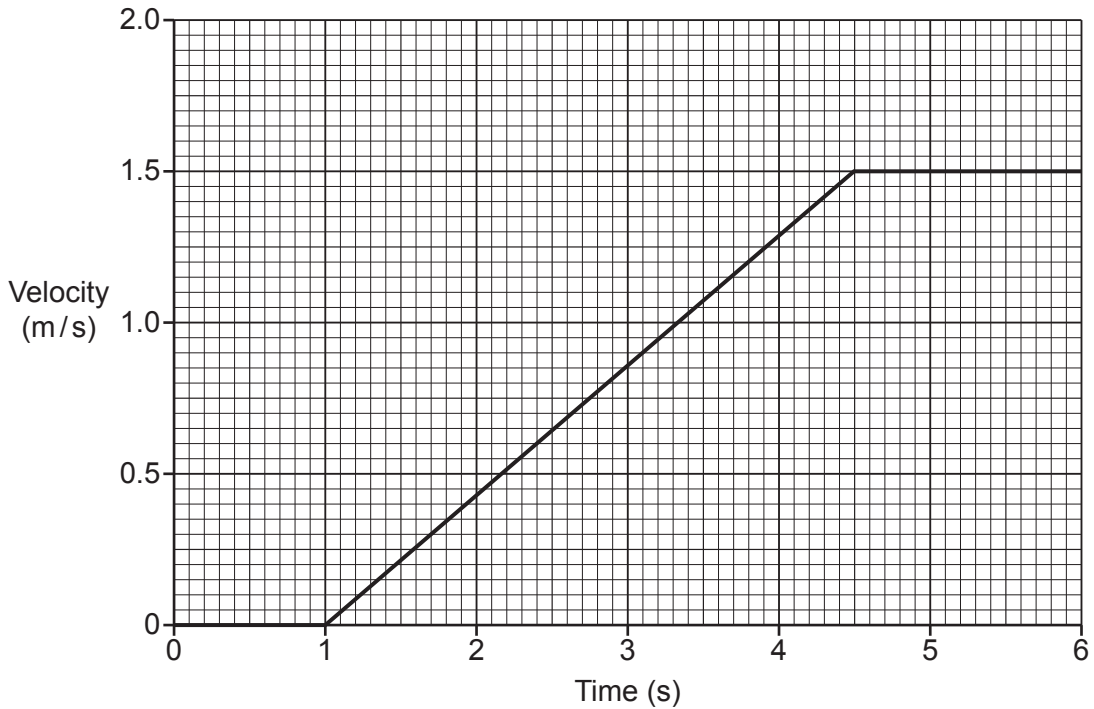
- (a) (i) Suggest the equipment the student uses to measure the **distance travelled** by the car on the ramp.

..... [1]

- (ii) Suggest the equipment the student uses to measure the **time** it takes the car to roll down the ramp.

..... [1]

(b) This is the velocity–time graph for the car.



- (i) State the time the car starts to move.
..... [1]
- (ii) State the time the car reaches the bottom of the ramp.
..... [1]
- (iii) Describe how the acceleration of the car will change if the ramp is made steeper.
..... [1]
- (iv) Draw a line on the graph to show the acceleration of the car if the ramp is made steeper. [1]

(c) Velocity and speed are different quantities.

Complete the sentence about velocity. Use words from the list.

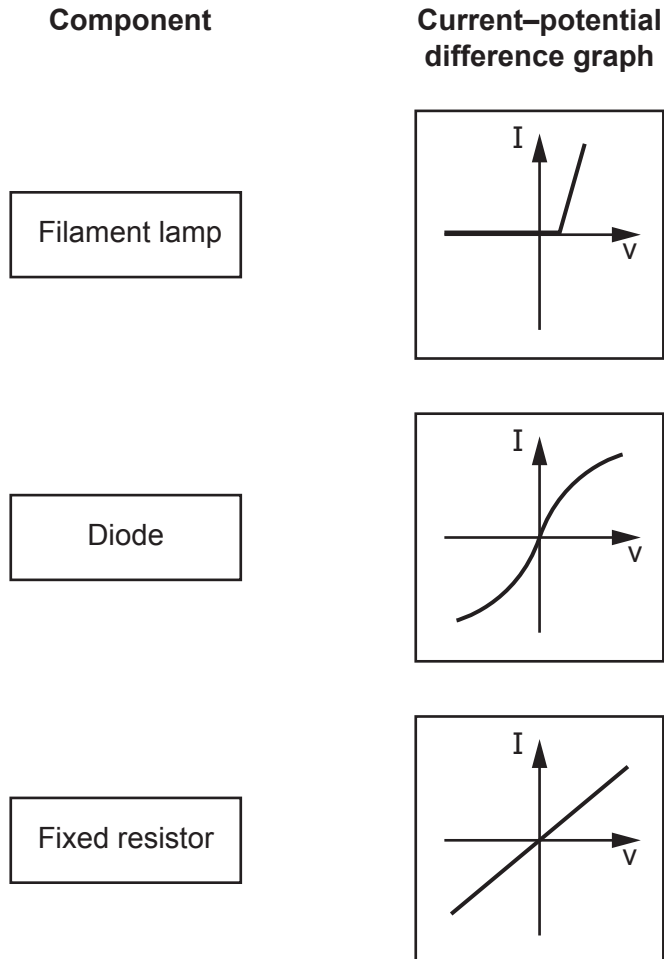
acceleration direction energy force magnitude

Velocity is a vector quantity because it has and [2]

- 17 (a) A student draws current–potential difference (I-V) graphs for three different components. These are shown in **Fig. 17.1**.

Draw one line from each **component** to its correct **current–potential difference graph**.

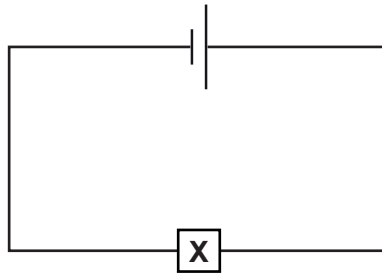
Fig. 17.1



[2]

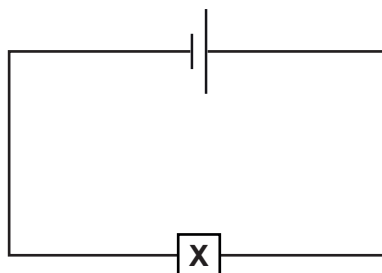
- (b) The student uses the circuit in **Fig. 17.2** to investigate the current in component **X** and the potential difference across it.

Fig. 17.2



- (i) State the name of the measuring instrument the student uses to measure the current in the circuit.
 [1]
- (ii) Draw the circuit symbol for the measuring instrument in **(b)(i)** in a correct position in **Fig. 17.2**.
 [2]
- (iii) State the name of the measuring instrument the student uses to measure the potential difference across component **X**.
 [1]
- (iv) Draw the circuit symbol for the measuring instrument in **(b)(iii)** in a correct position in **Fig. 17.3**.
 [2]

Fig. 17.3



(c) Component **X** has a resistance of $6.0\ \Omega$.

A current of 4.0A flows through component **X**.

Calculate the potential difference across component **X**.

Use the Equation Sheet.

Potential difference = V [3]

18 A student investigates how the number of turns of wire on an electromagnet affects the strength of the magnetic field produced.

The student passes a current through a wire wrapped around an iron nail and uses this to pick up paperclips.

(a) (i) Name **two** variables the student controls in the experiment.

1

2

[2]

(ii) The table shows the student's results.

| Number of turns | Number of paperclips picked up |
|-----------------|--------------------------------|
| 4 | 5 |
| 8 | 10 |
| 12 | 15 |
| 16 | 20 |
| 20 | 25 |

Describe the pattern shown by the student's results.

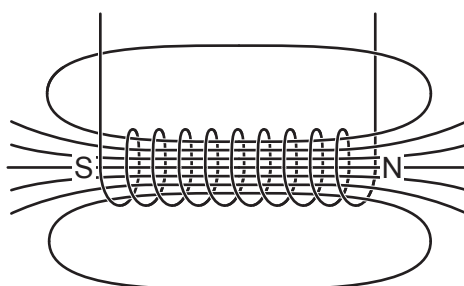
.....

..... [2]

(iii) Predict how many paperclips the electromagnet will pick up if it has 28 turns.

..... [1]

(b) The diagram shows a sketch of the magnetic field around the electromagnet.



(i) Add arrows to the magnetic field lines to show the direction of the magnetic field. [1]

(ii) Write the letter **X** to show a position where the magnetic field is stronger. [1]

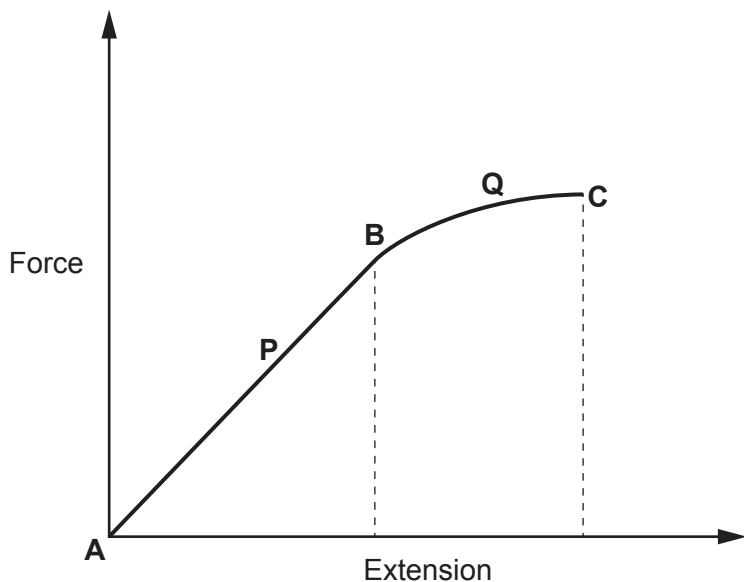
(iii) Write the letter **W** to show a position where the magnetic field is weaker. [1]

19 A student applies different forces to a spring and measures the extension of the spring each time. The force–extension graph shows their results.

A, B and C are points on the graph.

P is the region on the graph between points A and B.

Q is the region on the graph between points B and C where the spring is permanently deformed.



(a) Use the letters A, B, C, P and Q to answer the following questions about the graph.

(i) Which letter represents where the spring has elastic deformation?

..... [1]

(ii) Which letter represents where the spring obeys Hooke's Law?

..... [1]

(iii) Which letter represents the elastic limit of the spring?

..... [1]

(iv) Which letter represents where the graph is non-linear?

..... [1]

(b) State the **minimum** number of forces that need to be applied to the spring in order to stretch it.

..... [1]

(c) The spring constant of the spring is 28 N/m.

(i) Calculate the force exerted by the spring when it is extended by 0.15 m.

Use the equation: force exerted by a spring = spring constant \times extension

Force = N [2]

(ii) Calculate the energy transferred when the spring is extended by 0.15 m.

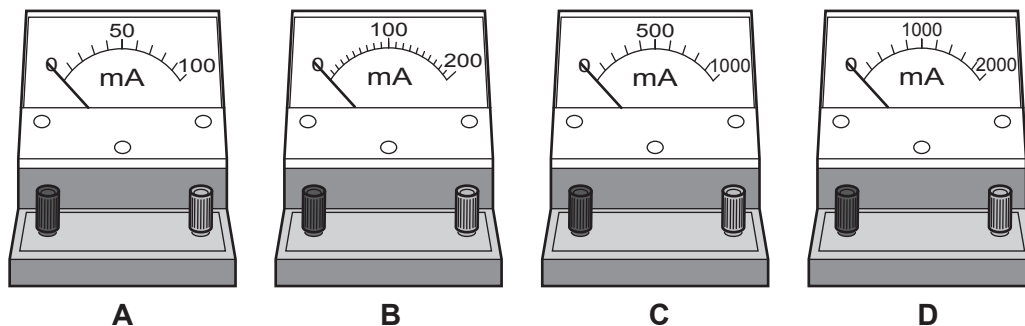
Use the Equation Sheet.

Energy transferred when stretching = J [2]

(b) At one of the temperatures, the current in the thermistor is 300 mA.

Fig. 20.3 shows a choice of ammeters that the student can use to measure this current accurately.

Fig. 20.3



Which ammeter should the student use to measure a current of 300 mA?

Ammeter

Explain your answer.

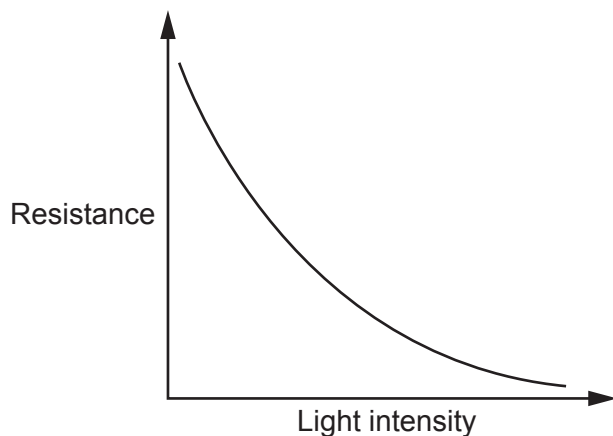
.....

.....

.....

[2]

(c) The graph shows how the resistance changes for a light dependent resistor (LDR).



State **one** use for a light dependent resistor and describe how it is used.

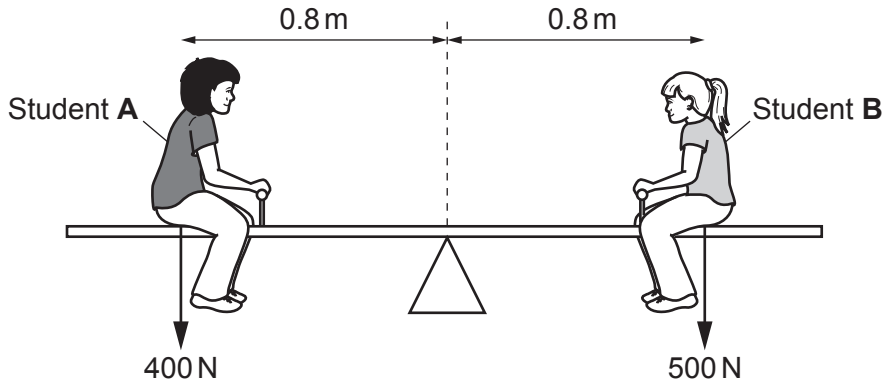
.....

.....

.....

[2]

21 The diagram shows two students sitting on a seesaw.



(a) (i) Explain what happens to the seesaw when both students lift their feet off the ground.

.....

 [2]

(ii) Calculate the distance from the pivot that student B sits to balance the seesaw when student A sits 0.6 m from the pivot.

Use the equation: moment of a force = force × distance

Distance = m [3]

(b) Student A has a weight of 400 N.

(i) Calculate the mass of student A.

Use the equation: gravitational force = mass × gravitational field strength

Mass = kg [3]

(ii) Student A stands on one foot when they leave the seesaw.

The area of their foot in contact with the ground is $2.5 \times 10^{-2} \text{ m}^2$.

Calculate the pressure student A exerts on the ground.

Use the Equation Sheet.

Pressure = Pa [3]

22 (a) A teacher drops a ball from a height of 2.1 m. The ball hits the floor after 0.6 s.

Calculate the average speed of the ball as it falls.

Use the equation: distance travelled = average speed \times time

Average speed = m/s [3]

(b) The teacher draws a free body force diagram for the ball as it falls.



(i) Label the two forces acting on the ball as it falls. [2]

(ii) Explain the motion of the ball as it falls.

.....
.....
..... [2]

(c) A lorry has a mass of 30 000 kg.

Calculate the force needed to accelerate the lorry at 3.0 m/s^2 .

Use the Equation Sheet.

Force = N [3]

23 A scientist investigates how the pressure and volume of a gas are related.

The results from their experiment are shown in the table.

| Pressure (kPa) | Volume (cm ³) |
|----------------|---------------------------|
| 300 | 250 |
| 500 | 150 |
| 625 | 120 |
| 1000 | 75 |
| 1250 | 60 |

(a) Explain how these results show that pressure \times volume = constant.

Use calculations in your answer.

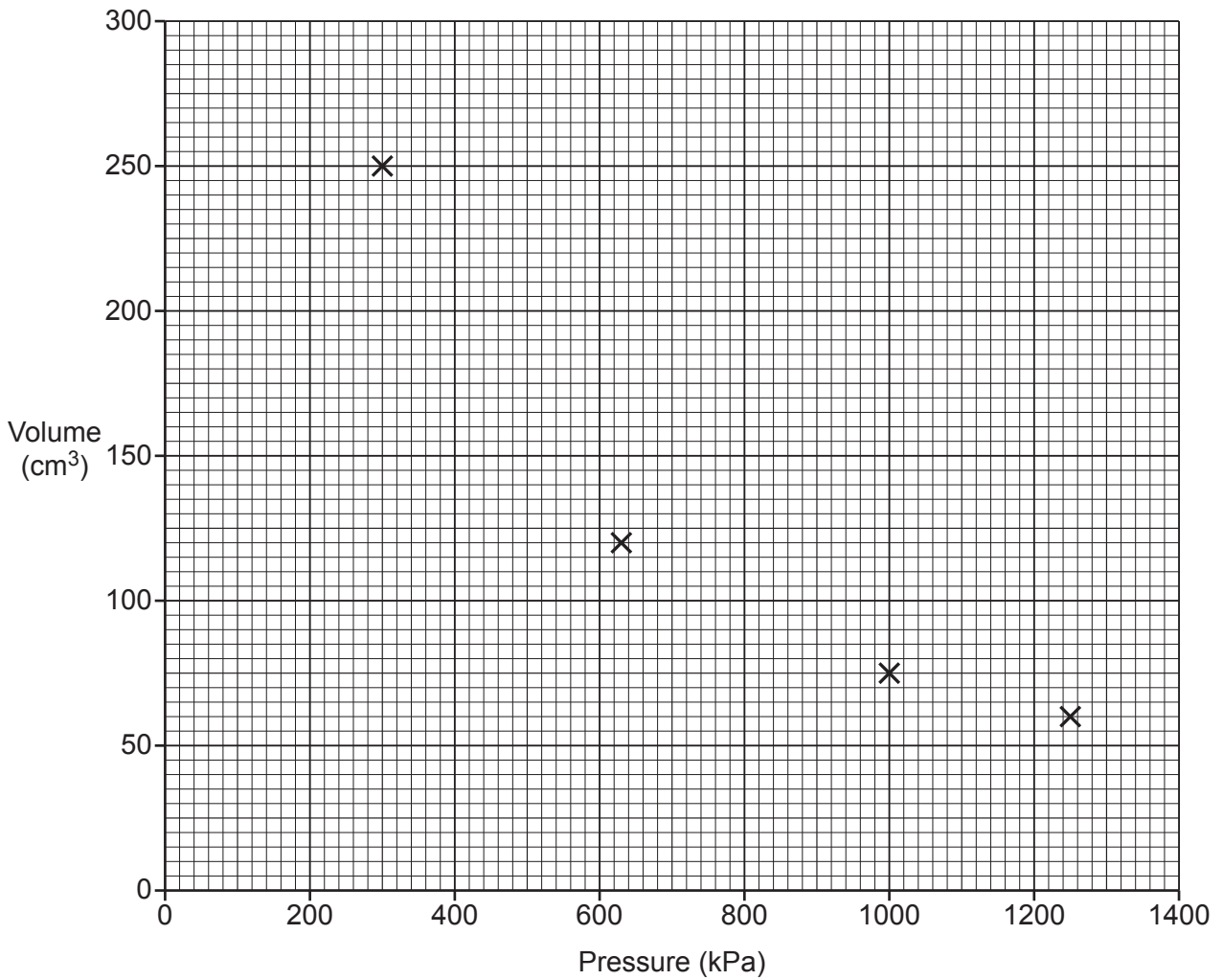
.....

.....

.....

..... [3]

(b) The graph shows the scientist's results.



(i) Plot the missing point on the graph. [1]

(ii) Draw a line of best fit on the graph. [1]

(iii) Use the graph to find the volume of gas at 900 kPa.

Volume of gas = cm³ [1]

(c) Explain how and why atmospheric pressure changes with height above the surface of the Earth.

.....

.....

.....

..... [2]

END OF QUESTION PAPER

ADDITIONAL ANSWER SPACE

If additional space is required, you should use the following lined page(s). The question number(s) must be clearly shown in the margin(s).

A large rectangular area with a vertical solid line on the left side and horizontal dotted lines across the rest of the page, providing space for writing answers.



Copyright Information

OCR is committed to seeking permission to reproduce all third-party content that it uses in its assessment materials. OCR has attempted to identify and contact all copyright holders whose work is used in this paper. To avoid the issue of disclosure of answer-related information to candidates, all copyright acknowledgements are reproduced in the OCR Copyright Acknowledgements Booklet. This is produced for each series of examinations and is freely available to download from our public website (www.ocr.org.uk) after the live examination series.

If OCR has unwittingly failed to correctly acknowledge or clear any third-party content in this assessment material, OCR will be happy to correct its mistake at the earliest possible opportunity.

For queries or further information please contact The OCR Copyright Team, The Triangle Building, Shaftesbury Road, Cambridge CB2 8EA.

OCR is part of Cambridge University Press & Assessment, which is itself a department of the University of Cambridge.