

Please check the examination details below before entering your candidate information

Candidate surname

Other names

Centre Number

Candidate Number

--	--	--	--	--

--	--	--	--	--

**Pearson Edexcel Level 1/Level 2 GCSE (9–1)**

**Wednesday 14 June 2023**

Morning (Time: 1 hour 30 minutes)

Paper  
reference

**1MA1/3H**

**Mathematics**

**PAPER 3 (Calculator)**

**Higher Tier**



**You must have:** Ruler graduated in centimetres and millimetres, protractor, pair of compasses, pen, HB pencil, eraser, calculator, Formulae Sheet (enclosed). Tracing paper may be used.

Total Marks

## Instructions

- Use **black** ink or ball-point pen.
- **Fill in the boxes** at the top of this page with your name, centre number and candidate number.
- Answer **all** questions.
- Answer the questions in the spaces provided  
– *there may be more space than you need.*
- You must **show all your working**.
- Diagrams are **NOT** accurately drawn, unless otherwise indicated.
- **Calculators may be used.**
- If your calculator does not have a  $\pi$  button, take the value of  $\pi$  to be 3.142 unless the question instructs otherwise.

## Information

- The total mark for this paper is 80
- The marks for **each** question are shown in brackets  
– *use this as a guide as to how much time to spend on each question.*

## Advice

- Read each question carefully before you start to answer it.
- Try to answer every question.
- Check your answers if you have time at the end.

Turn over ►

P75152A

©2023 Pearson Education Ltd.  
N:1/1/1/1/1/1/



P 7 5 1 5 2 A 0 1 2 4



Pearson

Answer ALL questions.

Write your answers in the spaces provided.

You must write down all the stages in your working.

1 (a) Simplify  $(m^2)^3$

.....  
(1)

(b) Simplify  $x^5 \times x^8$

.....  
(1)

(c) Expand  $4p(p^2 + 3p)$

.....  
(2)

(Total for Question 1 is 4 marks)

DO NOT WRITE IN THIS AREA

DO NOT WRITE IN THIS AREA

DO NOT WRITE IN THIS AREA



DO NOT WRITE IN THIS AREA

DO NOT WRITE IN THIS AREA

DO NOT WRITE IN THIS AREA

2 Jonny wants to know how much coffee he will need for 800 people at a meeting.

Each person who drinks coffee will drink 2 cups of coffee.  
10.6 g of coffee is needed for each cup of coffee.

Jonny assumes 68% of the people will drink coffee.

- (a) Using this assumption, work out the amount of coffee Jonny needs.  
Give your answer correct to the nearest gram.

..... (4) g

Jonny's assumption is wrong.  
72% of the people will drink coffee.

- (b) How does this affect your answer to part (a)?

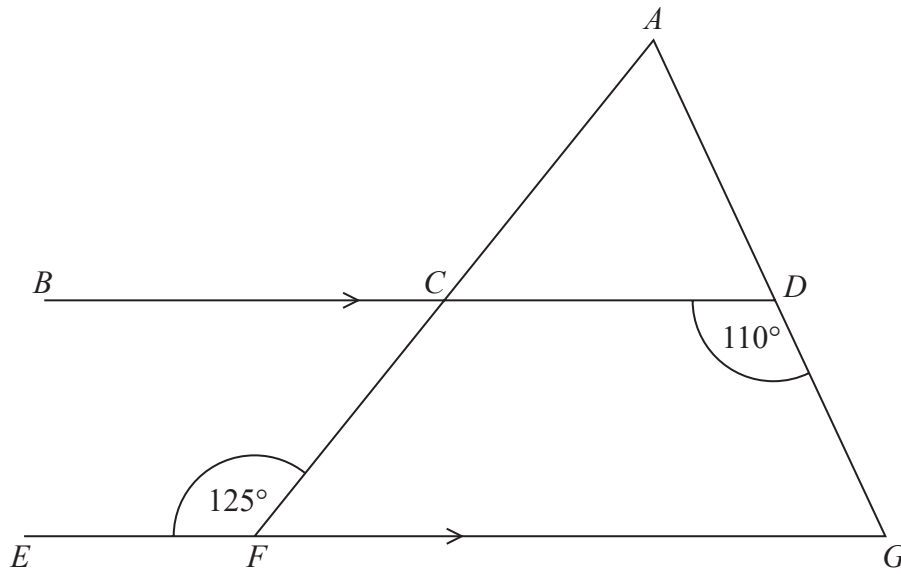
.....  
.....  
..... (1)

(Total for Question 2 is 5 marks)



P 7 5 1 5 2 A 0 3 2 4

- 3  $ACF$  and  $ADG$  are straight lines.  
 $BCD$  and  $EFG$  are parallel lines.



Show that triangle  $ACD$  is isosceles.  
Give a reason for each stage of your working.

(Total for Question 3 is 5 marks)



DO NOT WRITE IN THIS AREA

DO NOT WRITE IN THIS AREA

DO NOT WRITE IN THIS AREA

4 It takes 14 hours for 5 identical pumps to fill a water tank.

How many hours would it take 4 of these pumps to fill another water tank of the same size?

..... hours

**(Total for Question 4 is 2 marks)**



P 7 5 1 5 2 A 0 5 2 4

5  $A$  and  $B$  are numbers such that

$$A = 2^2 \times 3^4 \times 7$$

$$B = 3^2 \times 7^2$$

(a) Find the highest common factor (HCF) of  $A$  and  $B$ .

.....  
(1)

(b) Find the lowest common multiple (LCM) of  $A$  and  $B$ .

.....  
(2)

**(Total for Question 5 is 3 marks)**

DO NOT WRITE IN THIS AREA

DO NOT WRITE IN THIS AREA

DO NOT WRITE IN THIS AREA



DO NOT WRITE IN THIS AREA

DO NOT WRITE IN THIS AREA

DO NOT WRITE IN THIS AREA

6 Lava flows from a volcano at a constant rate of  $11.9\text{ m}^3/\text{s}$

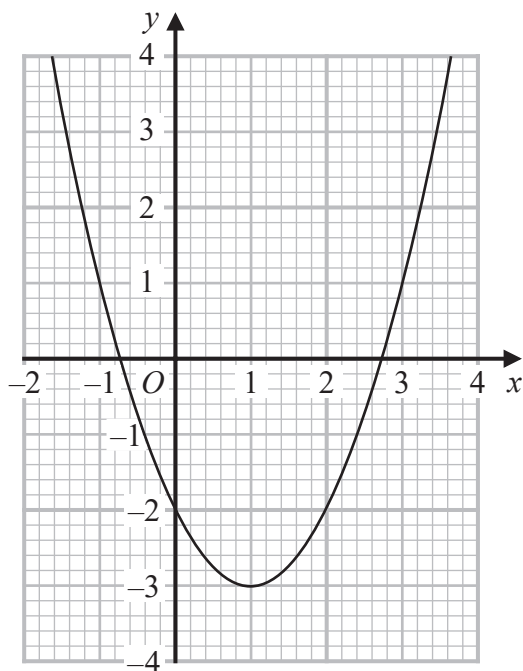
How many days does it take for  $67\,205\,600\text{ m}^3$  of lava to flow from the volcano?  
Give your answer correct to the nearest day.

..... days

**(Total for Question 6 is 3 marks)**



7 Here is the graph of  $y = x^2 - 2x - 2$



(a) Write down the coordinates of the turning point on the graph of  $y = x^2 - 2x - 2$

(....., .....)  
(1)

(b) Write down an estimate for one of the roots of  $x^2 - 2x - 2 = 0$

.....  
(1)

**(Total for Question 7 is 2 marks)**





DO NOT WRITE IN THIS AREA

DO NOT WRITE IN THIS AREA

DO NOT WRITE IN THIS AREA

8 A solid cuboid is made of metal.

The metal has a density of  $9 \text{ g/cm}^3$

The volume of the cuboid is  $72 \text{ cm}^3$

Work out the mass of the cuboid.

..... g

**(Total for Question 8 is 2 marks)**

9 Some people were asked if they wanted a new television.

70% of the people said yes.

80% of the people who said yes wanted a television with a large screen.

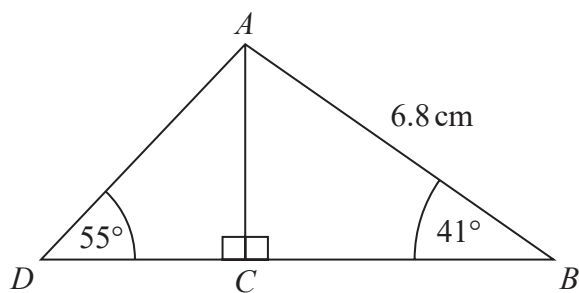
What percentage of the people asked said they wanted a television with a large screen?

.....%

**(Total for Question 9 is 2 marks)**



- 10  $ABD$  is a triangle.  
 $C$  is a point on  $BD$ .



Work out the length of  $DC$ .  
Give your answer correct to 1 decimal place.

..... cm

(Total for Question 10 is 3 marks)

DO NOT WRITE IN THIS AREA

DO NOT WRITE IN THIS AREA

DO NOT WRITE IN THIS AREA



DO NOT WRITE IN THIS AREA

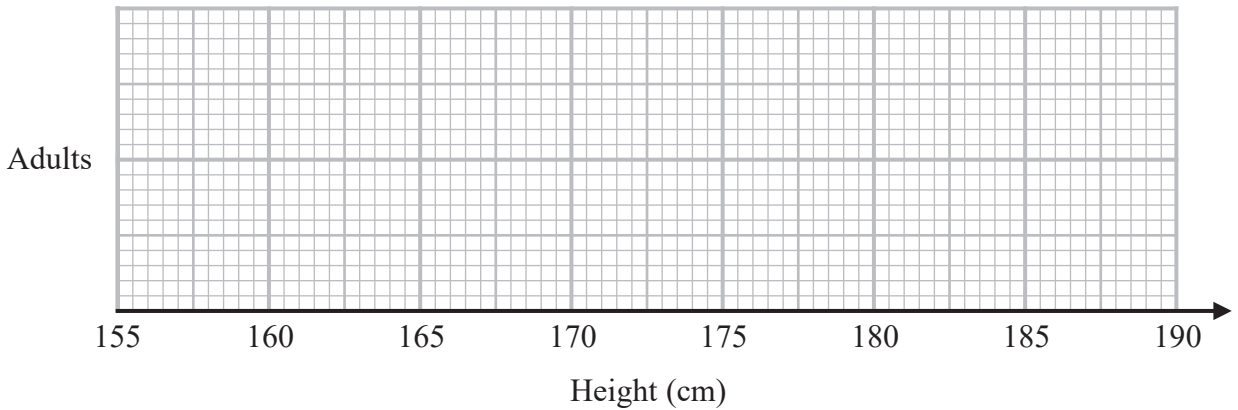
DO NOT WRITE IN THIS AREA

DO NOT WRITE IN THIS AREA

11 The table shows some information about the heights of a group of adults.

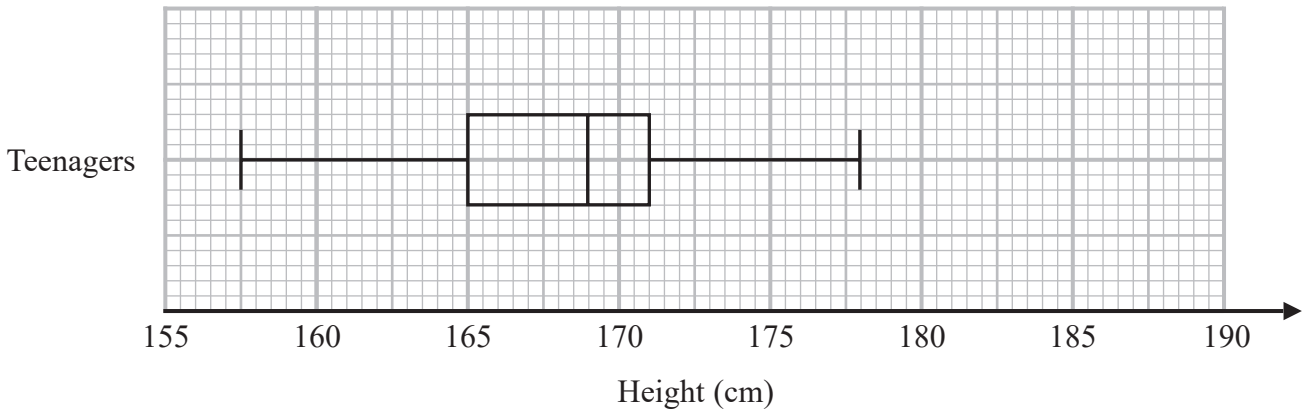
least height	169 cm
greatest height	186 cm
median	177 cm
lower quartile	174 cm
upper quartile	180 cm

(a) On the grid, draw a box plot for the information in the table.



(3)

The box plot below shows the distribution of the heights of a group of teenagers.



(b) Compare the distribution of the heights of the adults with the distribution of the heights of the teenagers.

.....

.....

.....

.....

(2)

(Total for Question 11 is 5 marks)



P 7 5 1 5 2 A 0 1 1 2 4

- 12 Show that  $(x - 1)(x + 3)(x - 5)$  can be written in the form  $ax^3 + bx^2 + cx + d$  where  $a, b, c$  and  $d$  are integers.

(Total for Question 12 is 3 marks)

- 13 An expression for the  $n$ th term of the sequence of triangular numbers is  $\frac{n(n + 1)}{2}$

Prove that the sum of any two consecutive triangular numbers is a square number.

(Total for Question 13 is 3 marks)

DO NOT WRITE IN THIS AREA

DO NOT WRITE IN THIS AREA

DO NOT WRITE IN THIS AREA

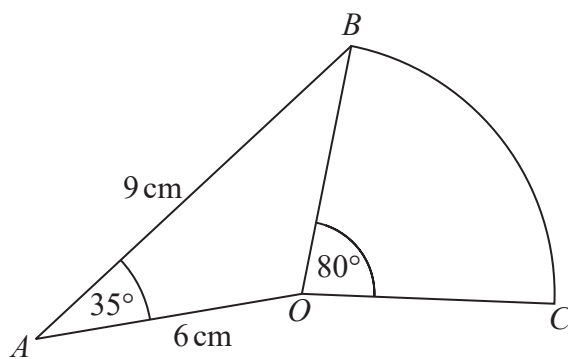


DO NOT WRITE IN THIS AREA

DO NOT WRITE IN THIS AREA

DO NOT WRITE IN THIS AREA

- 14  $OAB$  is a triangle.  
 $OBC$  is a sector of a circle, centre  $O$ .



Calculate the area of  $OBC$ .  
Give your answer correct to 3 significant figures.

.....  $\text{cm}^2$

(Total for Question 14 is 4 marks)



15 (a) Factorise  $a^2 - b^2$

.....  
(1)

(b) Show that  $2^{40} - 1$  is the product of two consecutive odd numbers.

(2)

(Total for Question 15 is 3 marks)

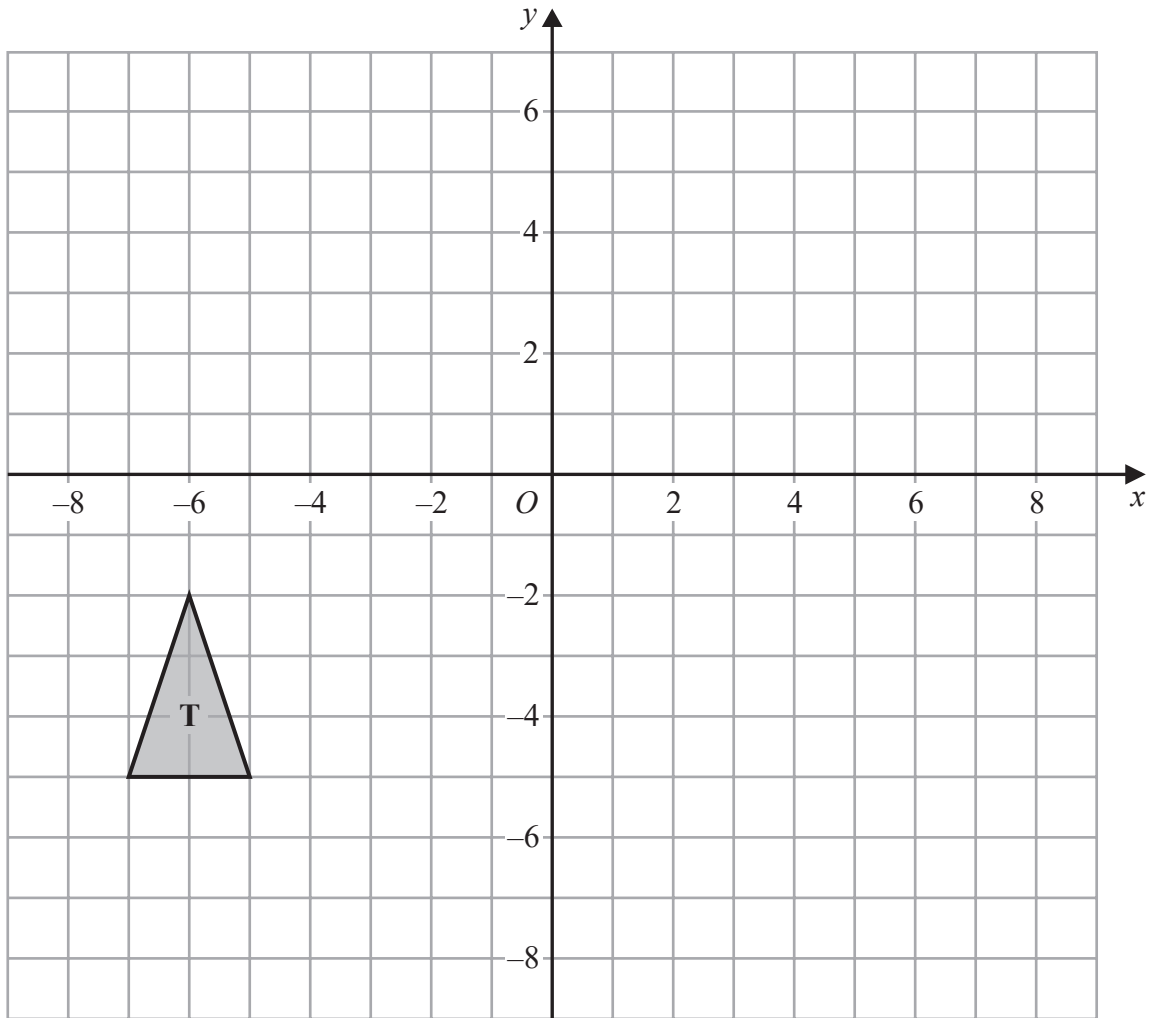
DO NOT WRITE IN THIS AREA

DO NOT WRITE IN THIS AREA

DO NOT WRITE IN THIS AREA



16



On the grid, enlarge triangle **T** by scale factor  $-2$  with centre of enlargement  $(-2, -2)$

(Total for Question 16 is 2 marks)

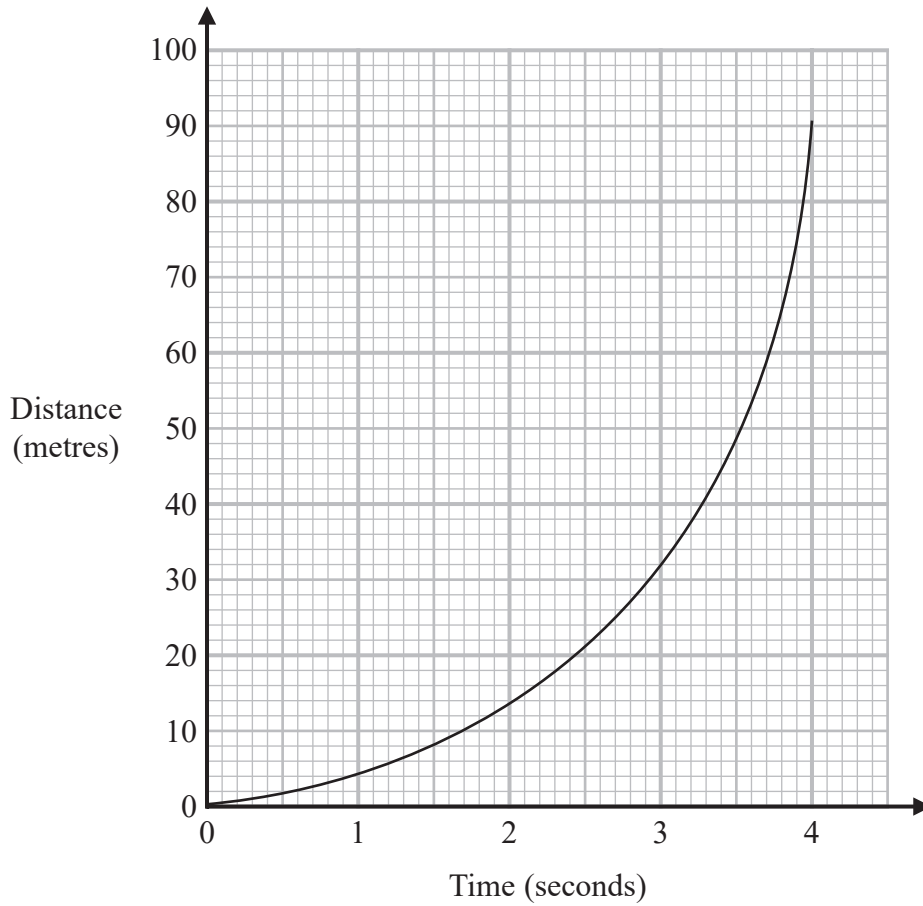
DO NOT WRITE IN THIS AREA

DO NOT WRITE IN THIS AREA

DO NOT WRITE IN THIS AREA



17 Here is a distance-time graph.



- (a) Find an estimate of the gradient of the graph at time 2.5 seconds.  
You must show how you get your answer.

.....  
(3)

- (b) What does the gradient of the graph represent?

.....  
.....  
(1)

(Total for Question 17 is 4 marks)



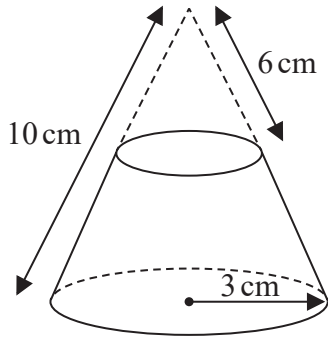


DO NOT WRITE IN THIS AREA

DO NOT WRITE IN THIS AREA

DO NOT WRITE IN THIS AREA

18 A solid frustum is made by removing a small cone from a large cone as shown in the diagram.



Curved surface area of cone =  $\pi r l$

The slant height of the small cone is 6 cm.  
 The slant height of the large cone is 10 cm.  
 The radius of the base of the large cone is 3 cm.

Calculate the total surface area of the frustum.  
 Give your answer correct to 3 significant figures.

..... cm<sup>2</sup>

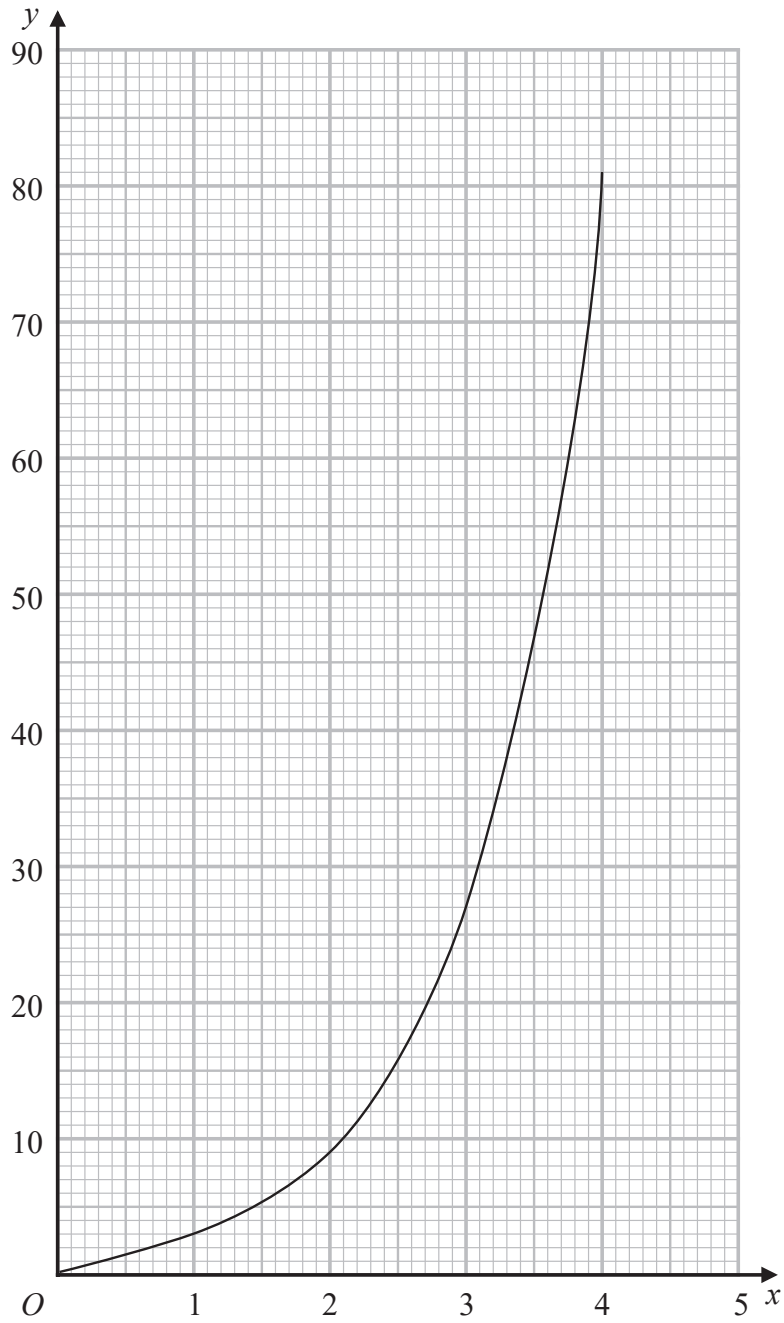
(Total for Question 18 is 5 marks)



P 7 5 1 5 2 A 0 1 7 2 4

19 Sana needs to draw the graph of  $y = 3^x$  for  $0 \leq x \leq 4$

She draws the graph shown on the grid.



Write down one thing Sana has done wrong.

.....

.....

.....

(Total for Question 19 is 1 mark)



20 Prove algebraically that  $0.1\dot{2}\dot{3}$  can be written as  $\frac{61}{495}$

(Total for Question 20 is 3 marks)

DO NOT WRITE IN THIS AREA

DO NOT WRITE IN THIS AREA

DO NOT WRITE IN THIS AREA



21 Solve  $\frac{1}{x+4} + \frac{3}{2-2x} = 1$

DO NOT WRITE IN THIS AREA

DO NOT WRITE IN THIS AREA

DO NOT WRITE IN THIS AREA

.....  
(Total for Question 21 is 4 marks)



DO NOT WRITE IN THIS AREA

DO NOT WRITE IN THIS AREA

DO NOT WRITE IN THIS AREA

22 Given that the vector  $a\begin{pmatrix} 2 \\ 6 \end{pmatrix} + b\begin{pmatrix} 8 \\ 2 \end{pmatrix}$  is parallel to the vector  $\begin{pmatrix} 13 \\ 6 \end{pmatrix}$   
find an expression for  $b$  in terms of  $a$ .

.....  
(Total for Question 22 is 3 marks)



23 A circle has equation  $x^2 + y^2 = 25$

The point  $P$  with coordinates  $(-3, 4)$  lies on the circle.

Alex says that the tangent to the circle at  $P$  crosses the  $x$ -axis at the point  $(-8, 0)$

Is Alex correct?

You must show how you get your answer.

DO NOT WRITE IN THIS AREA

DO NOT WRITE IN THIS AREA

DO NOT WRITE IN THIS AREA

(Total for Question 23 is 4 marks)



DO NOT WRITE IN THIS AREA

24 There is a total of  $y$  counters in a box.

There are  $x$  pink counters and 5 blue counters in the box.  
The rest of the counters are green.

$$x:y = 1:3$$

Freda takes at random two counters from the box.

Find, in terms of  $x$ , an expression for the probability that Freda takes two counters of the same colour.

Give your answer as a fraction in the form  $\frac{ax^2 + bx + c}{dx^2 + ex}$  where  $a, b, c, d$  and  $e$  are integers.

.....  
(Total for Question 24 is 5 marks)

---

TOTAL FOR PAPER IS 80 MARKS



DO NOT WRITE IN THIS AREA

DO NOT WRITE IN THIS AREA

DO NOT WRITE IN THIS AREA

**BLANK PAGE**

