

Friday 09 October 2020 – Morning

AS Level Physics A

H156/01 Breadth in physics

Time allowed: 1 hour 30 minutes



You must have:

- the Data, Formulae and Relationships Booklet

You can use:

- a scientific or graphical calculator
- a ruler (cm/mm)



Please write clearly in black ink. **Do not write in the barcodes.**

Centre number

--	--	--	--	--

Candidate number

--	--	--	--

First name(s)

Last name

INSTRUCTIONS

- Use black ink. You can use an HB pencil, but only for graphs and diagrams.
- Write your answer to each question in the space provided. If you need extra space use the lined pages at the end of this booklet. The question numbers must be clearly shown.
- Answer **all** the questions.
- Where appropriate, your answer should be supported with working. Marks might be given for using a correct method, even if your answer is wrong.

INFORMATION

- The total mark for this paper is **70**.
- The marks for each question are shown in brackets [].
- This document has **28** pages.

ADVICE

- Read each question carefully before you start your answer.

2
SECTION A

You should spend a maximum of 25 minutes on this section.

Answer **all** the questions.

Write your answer to each question in the box provided.

- 1 One of Kirchhoff's laws is stated below.

The sum of the currents entering a point in a circuit is equal to the sum of the currents leaving the same point.

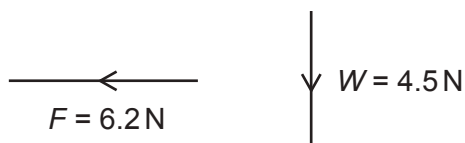
Which quantity is conserved according to this law?

- A charge
- B energy
- C mass
- D potential difference

Your answer

[1]

- 2 An object is in equilibrium under the action of three coplanar forces F , R and W . The diagram below shows the forces F and W .



The angle between F and W is 90° .

Which row shows the correct magnitude of R and the approximate direction of R ?

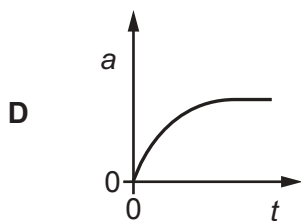
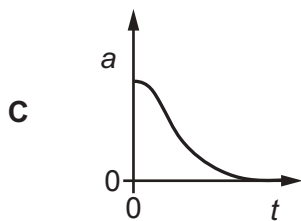
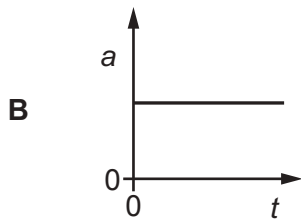
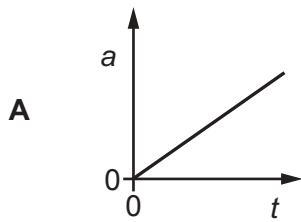
	Magnitude of R /N	Direction of R
A	7.7	
B	7.7	
C	10.7	
D	10.7	

Your answer

[1]

- 3 A ball, made from scrunched-up paper, is dropped from rest at time $t = 0$. It reaches terminal velocity before it hits the ground.

Which acceleration a against time t graph is correct for the ball in flight?



Your answer

[1]

- 4 An electron with initial kinetic energy of 100 eV and initial speed of $5.9 \times 10^6 \text{ ms}^{-1}$ is **accelerated** through a potential difference of 250 V.

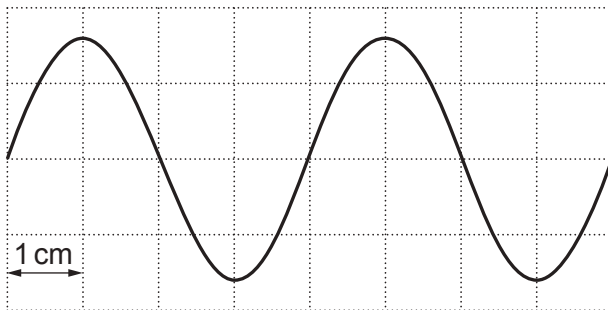
What is the final speed of this electron?

- A $5.9 \times 10^6 \text{ ms}^{-1}$
 B $7.3 \times 10^6 \text{ ms}^{-1}$
 C $9.4 \times 10^6 \text{ ms}^{-1}$
 D $1.1 \times 10^7 \text{ ms}^{-1}$

Your answer

[1]

- 5 The diagram below shows the oscilloscope trace for an electrical signal.



The frequency of the signal is 250 Hz.

What is the time-base setting of the oscilloscope?

- A 1 ms cm^{-1}
 B 2 ms cm^{-1}
 C 4 ms cm^{-1}
 D 8 ms cm^{-1}

Your answer

[1]

6 This question is about progressive waves and stationary waves.

Which statement is **not** correct?

- A A progressive wave transports energy through space.
- B A stationary wave must have at least one node.
- C For both waves, the amplitude of the oscillation is the same everywhere along the wave.
- D In the stationary wave, the oscillations of the particles at two adjacent antinodes are out of phase by 180° .

Your answer

[1]

7 A proton has kinetic energy 8.00×10^{-17} J.

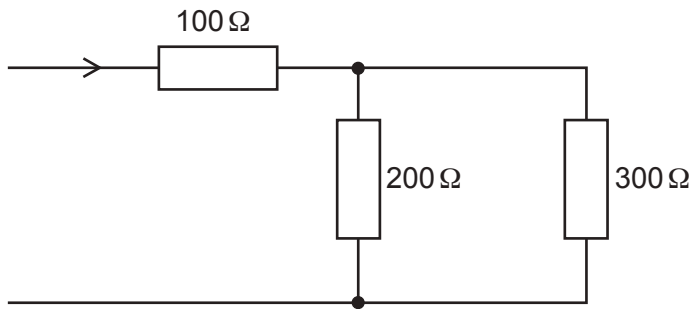
Which is the correct expression for the de Broglie wavelength λ of the proton?

- A $\lambda = \frac{6.63 \times 10^{-34}}{2 \times 1.67 \times 10^{-27} \times 8.00 \times 10^{-17}}$
- B $\lambda = \frac{6.63 \times 10^{-34}}{2 \times 9.11 \times 10^{-31} \times 8.00 \times 10^{-17}}$
- C $\lambda = \frac{6.63 \times 10^{-34}}{\sqrt{2 \times 1.67 \times 10^{-27} \times 8.00 \times 10^{-17}}}$
- D $\lambda = \frac{6.63 \times 10^{-34}}{\sqrt{2 \times 9.11 \times 10^{-31} \times 8.00 \times 10^{-17}}}$

Your answer

[1]

- 8 The diagram below shows an electrical circuit.



The resistance of each resistor is shown.

All resistors are made from the same material and have the same diameter.

The mean drift velocity of the charge carriers in the $100\ \Omega$ resistor is v .

What is the mean drift velocity of the charge carriers in the $300\ \Omega$ resistor?

- A $0.40v$
- B $0.50v$
- C $0.60v$
- D $1.00v$

Your answer

[1]

- 9 A $0.30\ \text{kg}$ mass is hung from a spring. The length of the spring is now $16.0\ \text{cm}$. The length of the spring becomes $17.5\ \text{cm}$ when an **additional** $0.20\ \text{kg}$ mass is hung from the spring. The spring obeys Hooke's law.

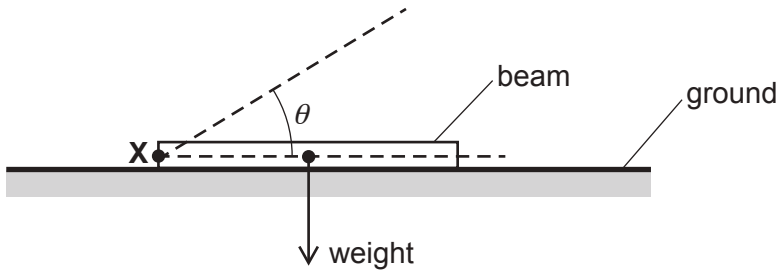
What is the force constant of the spring?

- A $11\ \text{Nm}^{-1}$
- B $12\ \text{Nm}^{-1}$
- C $130\ \text{Nm}^{-1}$
- D $330\ \text{Nm}^{-1}$

Your answer

[1]

- 10 A uniform beam is initially lying on horizontal ground, as shown below.

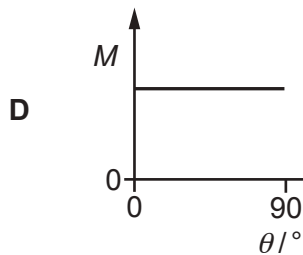
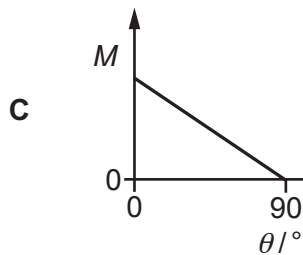
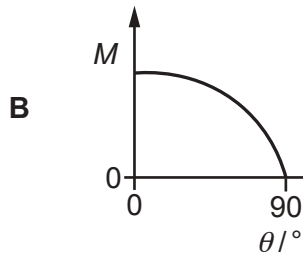
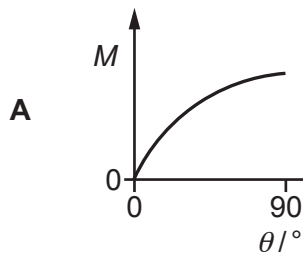


The end **X** of the beam is hinged.

The beam is tilted from angle $\theta = 0$ to $\theta = 90^\circ$.

The moment of the weight of the beam about point **X** is M .

Which M against θ graph is correct?



Your answer

[1]

- 11 A small block of wood is placed in deep water.
The block is at rest with 80% of its volume under the surface of water.
The weight of the block is 6.0 N.

What is the upthrust acting on the block?

- A 0
- B 1.2 N
- C 4.8 N
- D 6.0 N

Your answer

[1]

- 12 The momentum of an object moving to the left is 28 kg ms^{-1} .
A force of magnitude 3.5 N acts on the object to the right for a time of 2.0 s.

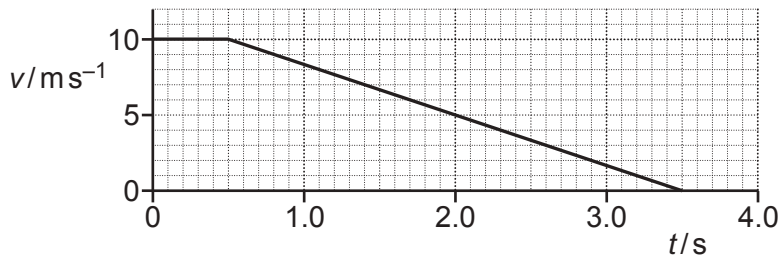
What is the **change** in the momentum of the object?

- A 7.0 kg ms^{-1}
- B 21 kg ms^{-1}
- C 28 kg ms^{-1}
- D 35 kg ms^{-1}

Your answer

[1]

- 13 A driver sees an obstacle ahead in the road at time $t = 0$ and then applies the brakes. The velocity v against time t graph for the car is shown below.



Which row is correct?

	Reaction time of driver/s	Braking distance of car/m
A	0.5	15.0
B	0.5	17.5
C	3.5	15.0
D	3.5	17.5

Your answer

[1]

- 14 A seabird dives vertically into water. The seabird is briefly stationary at its **greatest** depth. In water, the upthrust on this seabird is always greater than the weight of the seabird.

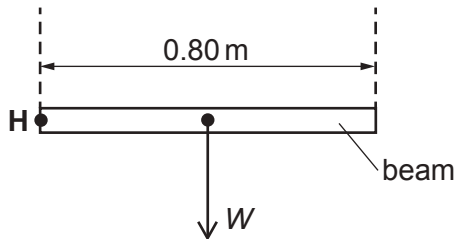
Which statement is correct at the instant of greatest depth?

- A** The seabird experiences greatest drag.
- B** The seabird has an upward acceleration.
- C** The upthrust on the seabird is equal to drag.
- D** The weight of the seabird is equal to drag.

Your answer

[1]

- 15 A uniform beam has length 0.80 m and weight W .
The beam is hinged at point **H**.
A cable is attached to the beam at a distance x from **H**. The vertical upwards force in the cable is $0.75W$. **The cable is not shown in the diagram.**
The beam is at rest in the horizontal position.



Which condition is correct?

- A $x < 0.40$ m
- B $x = 0.40$ m
- C 0.40 m $< x < 0.80$ m
- D $x = 0.80$ m

Your answer

[1]

- 16 What is the S.I. unit for electrical charge?

- A ampere
- B coulomb
- C ohm
- D volt

Your answer

[1]

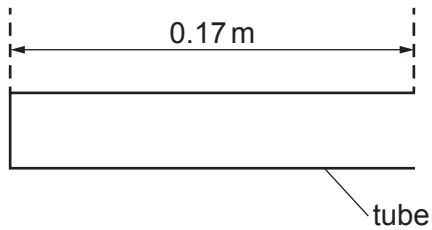
- 17 Which pair of quantities have the same S.I. base units?

- A force, energy
- B moment, momentum
- C power, work done
- D work done, moment

Your answer

[1]

- 18 A stationary sound wave, of fundamental mode of vibration, is formed in a tube closed at one end.



The length of the tube is 0.17 m. The speed of sound in air is 340 ms^{-1} .

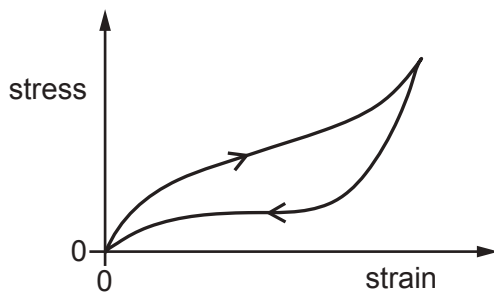
What is the fundamental frequency of the stationary wave?

- A 500 Hz
- B 1000 Hz
- C 2000 Hz
- D 4000 Hz

Your answer

[1]

- 19 The stress against strain graph for a particular material is shown below.



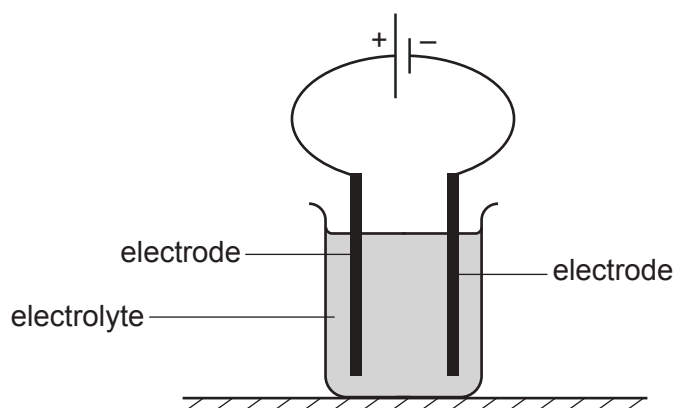
Which term is correct for a property of this material?

- A brittle
- B ductile
- C elastic
- D plastic

Your answer

[1]

- 20 Two electrodes are placed into a liquid (electrolyte).
The electrodes are connected to a cell.



Which row is correct?

	Direction of conventional current in the electrolyte	Particles responsible for the current in the electrolyte
A	To the left	Electrons
B	To the left	Ions
C	To the right	Electrons
D	To the right	Ions

Your answer

[1]

13
BLANK PAGE

PLEASE DO NOT WRITE ON THIS PAGE

Question 21 starts on page 14

SECTION B

Answer **all** the questions.

21 (a) Two objects collide. The collision is perfectly elastic.

State **two** quantities that are conserved in this type of collision.

1

2

[2]

(b) The diagram below shows a person on a horizontal skateboard holding a heavy ball.



The person is initially stationary.

The person throws the ball horizontally to the right.

Describe and explain the motion of the person on the skateboard **immediately** after the ball is thrown.

.....
.....
.....
.....
..... [3]

- 22 A toy parachute is falling through air.
The air resistance F acting on the parachute is given by the expression

$$F = kv^2$$

where v is the speed of the parachute and k is a constant.

- (a) The S.I. base units for F are kg m s^{-2} .

Show that the S.I. base units for k are kg m^{-1} .

[2]

- (b) The following items of data are collected for the parachute.

- $v = 1.20 \pm 0.12 \text{ m s}^{-1}$
- $F = 4.00 \pm 0.24 \text{ N}$

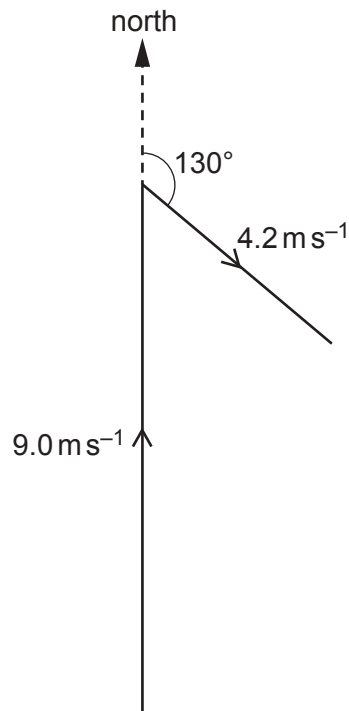
Calculate the absolute uncertainty in k . Write your answer to 2 significant figures.

absolute uncertainty in $k = \dots\dots\dots \text{kg m}^{-1}$ [3]

23 A drone is a small remotely-controlled aircraft.

- (a) A drone is travelling horizontally in a cross-wind.
 The drone is travelling due north at a constant speed 9.0 m s^{-1} relative to the air.
 The speed of the wind is 4.2 m s^{-1} . The direction of the wind is 130° from the north.

An incomplete vector diagram for determining the resultant velocity of the drone is shown below.

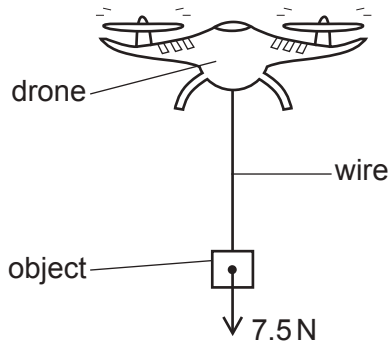


The vector diagram is drawn to scale.

- (i) Complete the vector diagram to show the resultant velocity of the drone. [1]
- (ii) Determine the magnitude of the resultant velocity v of the drone.

$v = \dots\dots\dots \text{ m s}^{-1}$ [2]

(b) The diagram below shows an object of weight 7.5 N hung from the drone using a steel wire.



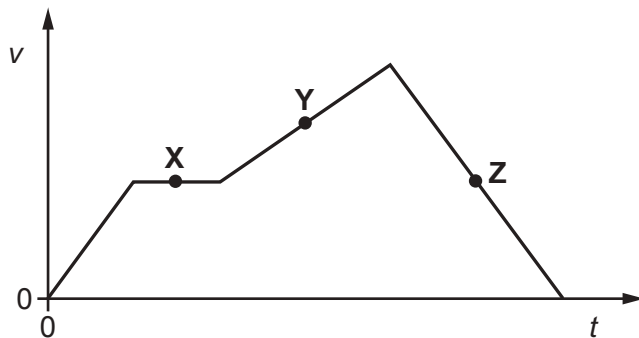
The drone is now hovering at a fixed position above the ground.

- (i) The wire has cross-sectional area $8.2 \times 10^{-7} \text{ m}^2$ and original length 62 cm. The Young modulus of steel is $2.0 \times 10^{11} \text{ Pa}$. The wire obeys Hooke's law.

Calculate the extension x of the wire.

$x = \dots\dots\dots \text{ m [3]}$

- (ii) The drone now moves vertically upwards. The velocity v against time t graph for the drone is shown below.



The tension in the wire at X is 7.5 N.

Describe and explain how the tension in the wire at Y and Z compares with 7.5 N.

.....

.....

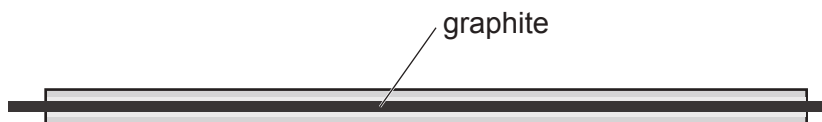
.....

.....

.....

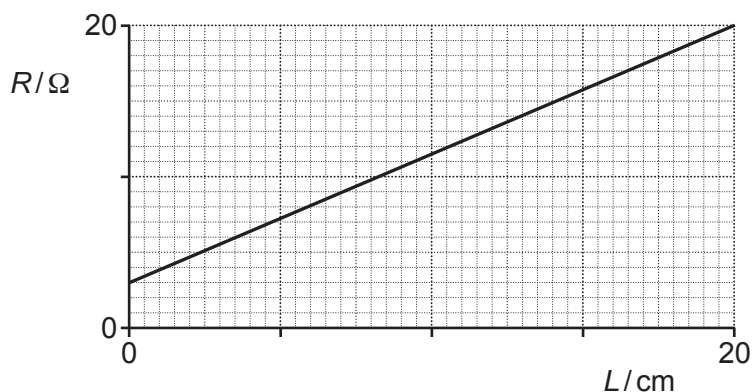
..... [3]

24 (a) The diagram below shows a pencil cut along its length exposing the graphite.



The resistance of a length L of the graphite is R . A student directly measures R using a multimeter (ohmmeter).

The following graph is plotted by the student.



(i) Suggest why the graph does not pass through the origin.

.....
 [1]

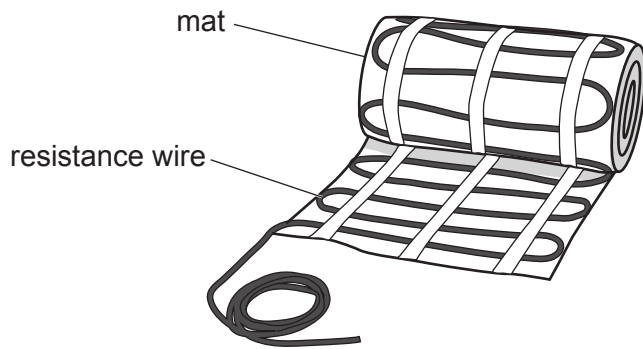
(ii) The resistivity of graphite is ρ .

Describe how the student can use the graph above, and an additional measuring instrument, to accurately determine ρ . No calculations are required.

.....

 [3]

(b) The diagram below shows a mat used for underfloor heating.



Each mat has resistance wire. The wire has cross-sectional area $6.7 \times 10^{-8} \text{m}^2$, total length 25m and resistance 180Ω . Each mat dissipates 300W when connected to the mains supply.

(i) A total output power 1.2kW is required for a room.

Calculate the number of mats required.

number of mats = [1]

(ii) Calculate the resistivity ρ of the material of the wire.

$\rho = \dots \dots \dots \Omega \text{m}$ [2]

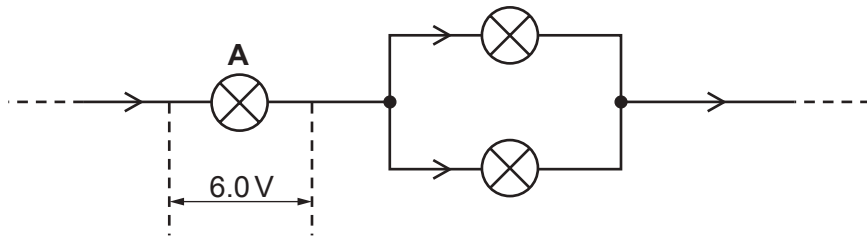
- 25 (a) A student connects a calibrated $10.0\ \Omega$ resistor across a chemical cell of electromotive force (e.m.f.) $1.50\ \text{V}$.
The student expects the current in the resistor to be $0.150\ \text{A}$.

Explain why the actual current will not be $0.150\ \text{A}$.

.....

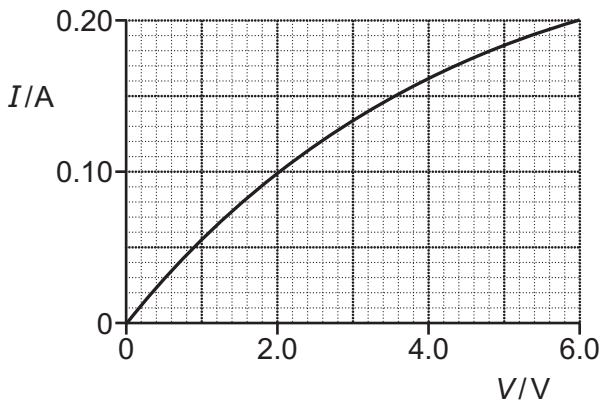
 [2]

- (b) The diagram below shows part of an electrical circuit connected by the student.



The lamps are identical.

The graph below shows the I - V characteristic of one of the lamps.

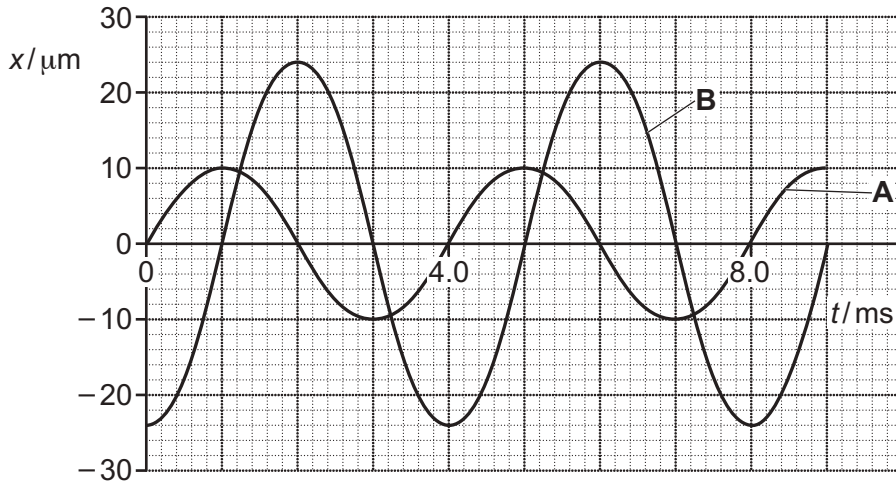


The potential difference (p.d.) across lamp **A** is $6.0\ \text{V}$.

Use the graph to determine the total resistance of the lamps.

resistance = Ω [3]

- 26 Two progressive waves **A** and **B** meet at a point **P**.
 The displacement x against time t graphs for **A** and **B** at the point **P** are shown below.



- (a) Explain how the graphs show that the waves are coherent.

.....
 [1]

- (b) Determine the frequency f of the wave **A**.

$f = \dots\dots\dots$ Hz [2]

- (c) The intensity of wave **A** is I_0 .

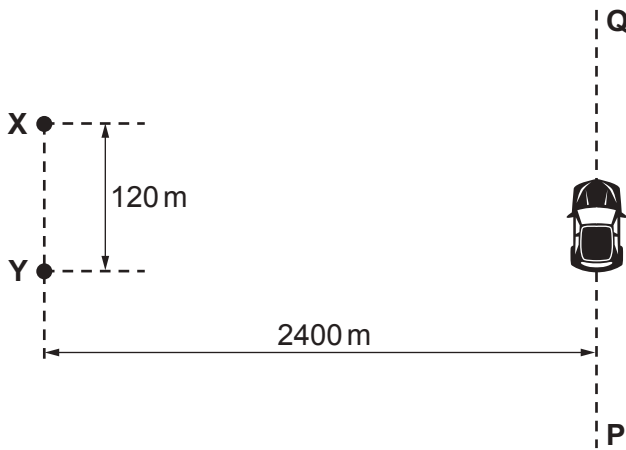
Determine the intensity of wave **B** in terms of I_0 .

intensity = $\dots\dots\dots I_0$ [2]

- (d) Determine the resultant displacement at the point **P** at time $t = 2.5$ ms.

resultant displacement = $\dots\dots\dots \mu\text{m}$ [1]

27 The diagram below shows two coherent sources of radio waves **X** and **Y**.



The diagram is **not** drawn to scale.

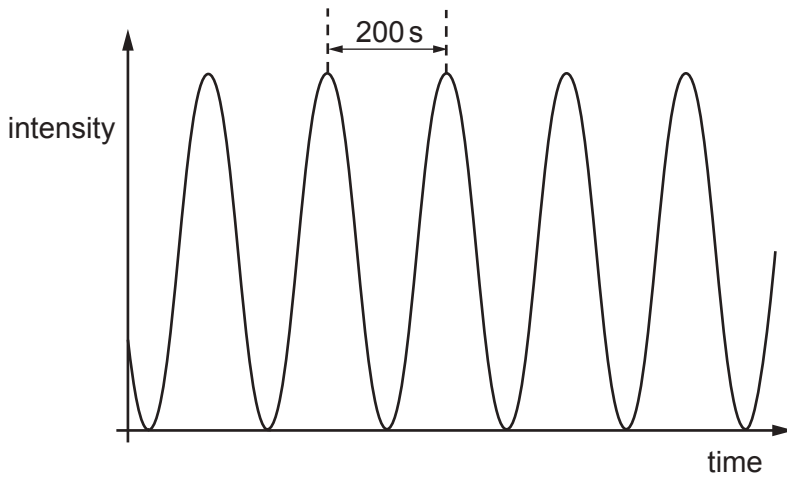
The radio waves are in phase at **X** and **Y**.

A car moves at a constant speed along the line **PQ**. The line **PQ** is parallel to line **XY**.

The separation between **X** and **Y** is 120 m.

The perpendicular distance between lines **PQ** and **XY** is 2400 m.

The intensity against time graph below shows the variation of the intensity of the radio waves at the position of the moving car.



(a) State the **principle of superposition of waves**.

.....

..... [1]

(b) Explain the maxima and minima in the variation of the intensity.

.....
.....
.....
..... [2]

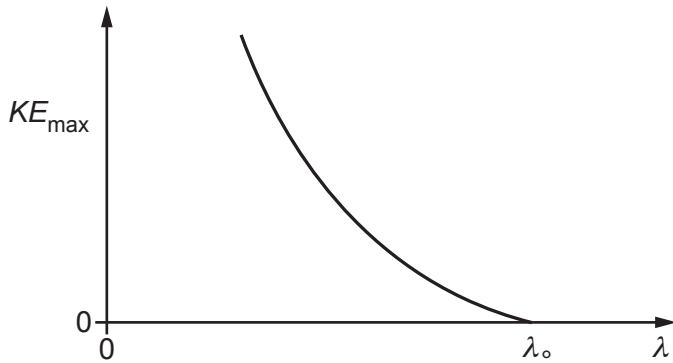
(c) The time between adjacent maxima is 200 s.
The speed of the car is 18 m s^{-1} .

Calculate the wavelength λ of the radio waves.

$\lambda = \dots\dots\dots \text{ m [3]}$

- 28 (a) Electromagnetic radiation, with a range of wavelengths, is incident on a metal. Electrons are removed from the metal due to the photoelectric effect.

The maximum kinetic energy KE_{\max} of the emitted electrons against wavelength λ graph is shown below.



Explain the shape of the graph in terms of quantum physics.

.....

.....

.....

.....

.....

.....

.....

..... [3]

- (b) Some lasers are used in eye surgery. One such laser emits a beam of light of wavelength 490 nm and power 230 mW.

Calculate

- (i) the energy of each photon of light from the laser.

energy = J [2]

- (ii) the number of photons of light emitted in each second.

number of photons = [2]

END OF QUESTION PAPER

ADDITIONAL ANSWER SPACE

If additional space is required, you should use the following lined page(s). The question number(s) must be clearly shown in the margin(s).

A large rectangular area for writing, bounded by a solid vertical line on the left and horizontal dotted lines on the top, bottom, and right. The dotted lines are spaced evenly down the page to provide a guide for handwriting.

A large rectangular area for writing, bounded by a solid vertical line on the left and horizontal dotted lines on the top, bottom, and right.



Copyright Information

OCR is committed to seeking permission to reproduce all third-party content that it uses in its assessment materials. OCR has attempted to identify and contact all copyright holders whose work is used in this paper. To avoid the issue of disclosure of answer-related information to candidates, all copyright acknowledgements are reproduced in the OCR Copyright Acknowledgements Booklet. This is produced for each series of examinations and is freely available to download from our public website (www.ocr.org.uk) after the live examination series. If OCR has unwittingly failed to correctly acknowledge or clear any third-party content in this assessment material, OCR will be happy to correct its mistake at the earliest possible opportunity.

For queries or further information please contact The OCR Copyright Team, The Triangle Building, Shaftesbury Road, Cambridge CB2 8EA.

OCR is part of the Cambridge Assessment Group; Cambridge Assessment is the brand name of University of Cambridge Local Examinations Syndicate (UCLES), which is itself a department of the University of Cambridge.