

Please write clearly in block capitals.

Centre number

--	--	--	--	--

Candidate number

--	--	--	--

Surname

---

Forename(s)

---

Candidate signature

---

I declare this is my own work.

# GCSE COMBINED SCIENCE: TRILOGY

# H

Higher Tier  
Chemistry Paper 1H

Time allowed: 1 hour 15 minutes

## Materials

For this paper you must have:

- a ruler
- a scientific calculator
- the periodic table (enclosed).

## Instructions

- Use black ink or black ball-point pen.
- Pencil should only be used for drawing.
- Fill in the boxes at the top of this page.
- Answer **all** questions in the spaces provided.
- If you need extra space for your answer(s), use the lined pages at the end of this book. Write the question number against your answer(s).
- Do all rough work in this book. Cross through any work you do not want to be marked.
- In all calculations, show clearly how you work out your answer.

## Information

- The maximum mark for this paper is 70.
- The marks for questions are shown in brackets.
- You are expected to use a calculator where appropriate.
- You are reminded of the need for good English and clear presentation in your answers.

For Examiner's Use	
Question	Mark
1	
2	
3	
4	
5	
6	
7	
<b>TOTAL</b>	



0 1

This question is about the periodic table.

0 1 . 1

**Figure 1** shows part of Mendeleev's version of the periodic table.**Figure 1**

H								
Li	Be	B	C	N	O	F		
Na	Mg	Al	Si	P	S	Cl		
K	Ca		Ti	V	Cr	Mn		
Cu	Zn			As	Se	Br	Fe	Co Ni
Rb	Sr	Y	Zr	Nb	Mo			
Ag	Cd	In	Sn	Sb	Te	I	Ru	Rh Pd

Which group of elements had **not** been discovered when Mendeleev's version of the periodic table was published?

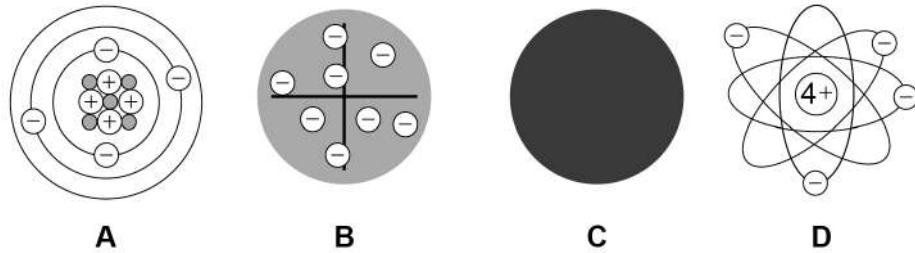
**[1 mark]**


---



Figure 2 represents different models of the atom.

Figure 2



0 1 2 Which model represents the plum pudding model?

[1 mark]

Tick (✓) **one** box.

A       B       C       D

0 1 3 Which model resulted from Chadwick's experimental work?

[1 mark]

Tick (✓) **one** box.

A       B       C       D

Question 1 continues on the next page

Turn over ►



Potassium has different isotopes.

0 1 . 4 What is meant by 'isotopes'?

You should refer to subatomic particles.

[2 marks]

---



---



---



---

0 1 . 5 **Table 1** shows the mass numbers and the percentage abundance of two isotopes of potassium.

**Table 1**

Mass number	Percentage abundance
39	93.1
41	6.9

Calculate the relative atomic mass ( $A_r$ ) of potassium.

Give your answer to 1 decimal place.

[3 marks]

---



---



---



---



---

Relative atomic mass (1 decimal place) = \_\_\_\_\_

8



**Turn over for the next question**

*Do not write  
outside the  
box*

**DO NOT WRITE ON THIS PAGE  
ANSWER IN THE SPACES PROVIDED**

**Turn over ►**



**0 2**

Acids react to produce salts.

Universal indicator is added to water and then nitric acid is added to the mixture.

**0 2 . 1**

Give the colour change when nitric acid is added to the mixture of universal indicator and water.

**[1 mark]**Tick (✓) **one** box.

Blue to red

Green to purple

Green to red

Red to purple

**0 2 . 2**

What happens to the pH of water when nitric acid is added?

**[1 mark]**Tick (✓) **one** box.

Decreases

Stays the same

Increases

**0 2 . 3**

What is the state symbol for nitric acid?

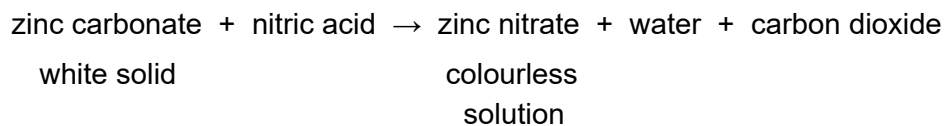
**[1 mark]**

---



Zinc carbonate reacts with nitric acid.

The word equation for the reaction is:



**0 2 . 4** Give **two** observations that would be made when zinc carbonate is added to nitric acid until the zinc carbonate is in excess.

**[2 marks]**

1 \_\_\_\_\_

2 \_\_\_\_\_

**0 2 . 5** The formula of the zinc ion is  $\text{Zn}^{2+}$

The formula of the nitrate ion is  $\text{NO}_3^-$

What is the formula for zinc nitrate?

**[1 mark]**

Tick (✓) **one** box.

$\text{ZnNO}_3$

$\text{Zn}(\text{NO}_3)_2$

$\text{Zn}_2\text{NO}_3$

$\text{Zn}_2(\text{NO}_3)_2$

**Question 2 continues on the next page**

**Turn over ►**







**Turn over for the next question**

*Do not write  
outside the  
box*

**DO NOT WRITE ON THIS PAGE  
ANSWER IN THE SPACES PROVIDED**

**Turn over ►**



0 3

This question is about energy change.

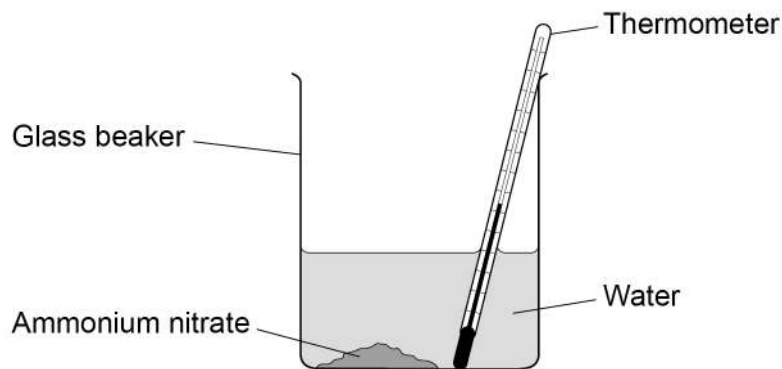
A student investigated the temperature change when 10 g of ammonium nitrate was added to 100 cm<sup>3</sup> of water.

This is the method used.

1. Measure the temperature of 100 cm<sup>3</sup> of water.
2. Add 10 g of ammonium nitrate.
3. Stir once.
4. Measure the temperature of the solution every minute for 7 minutes.

**Figure 3** shows the apparatus.

**Figure 3**



0 3 . 1

What is the dependent variable in this investigation?

[1 mark]

---

0 3 . 2

Give **three** improvements to the investigation to make the results more accurate.

[3 marks]

1 \_\_\_\_\_

\_\_\_\_\_

2 \_\_\_\_\_

\_\_\_\_\_

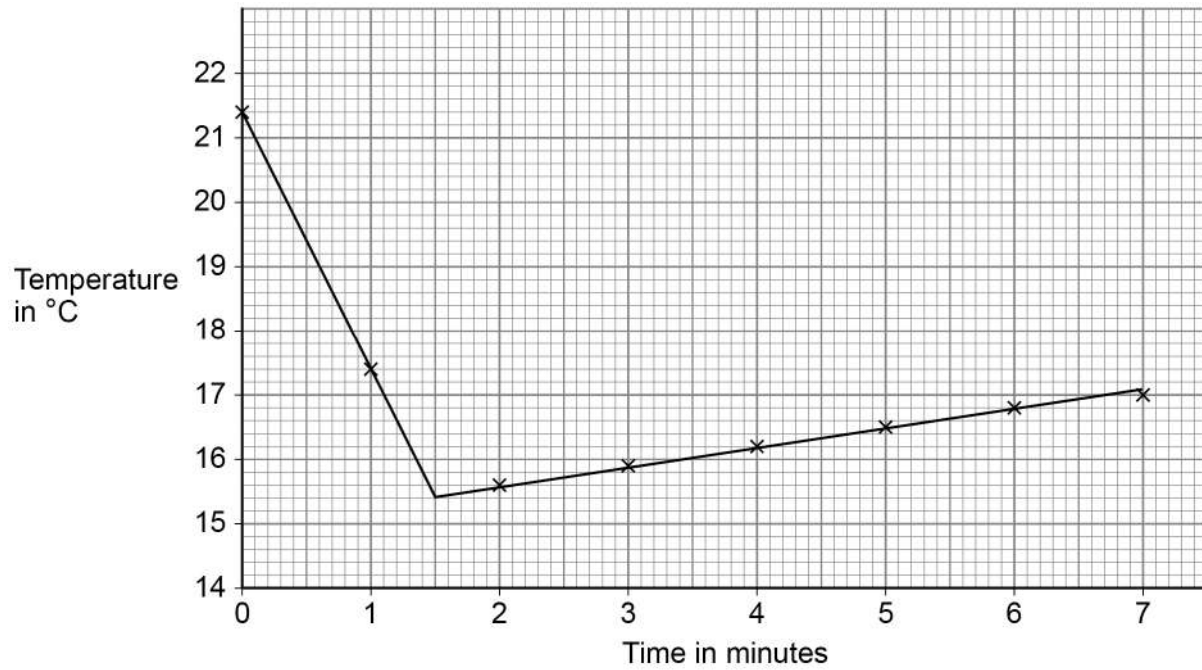
3 \_\_\_\_\_

\_\_\_\_\_



0 3 . 3 Figure 4 shows the results.

Figure 4



Explain the results.

[4 marks]

---



---



---



---



---



---



---



---



---



---

Question 3 continues on the next page

Turn over ►

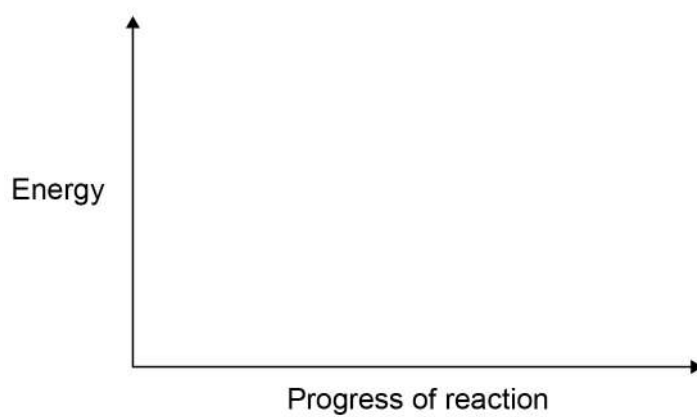


**0 3 . 4** Draw a reaction profile for an exothermic reaction.

You should label:

- the energy level of the reactants and of the products
- the activation energy
- the overall energy change.

**[4 marks]**



**12**



**Turn over for the next question**

*Do not write  
outside the  
box*

**DO NOT WRITE ON THIS PAGE  
ANSWER IN THE SPACES PROVIDED**

**Turn over ►**



**0 4**

Carbon can exist in a number of different structures.

**0 4 . 1**

The first fullerene to be discovered was Buckminsterfullerene.

What is the formula of Buckminsterfullerene?

**[1 mark]**Tick (✓) **one** box.C<sub>40</sub> C<sub>50</sub> C<sub>60</sub> C<sub>70</sub> **0 4 . 2**

Graphite is a form of carbon.

Explain why graphite conducts electricity.

**[2 marks]**

---

---

---

---



Steel is an alloy of iron and carbon.

**0 4 . 3** Explain why steel is harder than iron.

**[3 marks]**

---



---



---



---



---



---

**0 4 . 4** Iron is alloyed with carbon and other metals to make stainless steel.

A stainless steel fork contains 71.92% iron.

**Table 2** shows the mass of each element in the fork.

**Table 2**

Element	Iron	Carbon	Chromium	Nickel
Mass of element in g	<b>X</b>	0.05	10.44	5.80

Calculate the mass of iron (**X**) in the fork.

**[4 marks]**

---



---



---



---



---



---

**X =** \_\_\_\_\_ g

**10**

**Turn over ►**



**0 5**

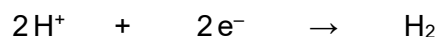
This question is about the electrolysis of aqueous solutions.

Hydrogen gas and chlorine gas are produced when sodium chloride solution is electrolysed.

**0 5 . 1**

Hydrogen ions ( $\text{H}^+$ ) are attracted to the negative electrode.

The half equation for the reaction at the negative electrode is:



What type of reaction happens at the negative electrode?

Give the reason for your answer.

**[2 marks]**

Type of reaction \_\_\_\_\_

Reason \_\_\_\_\_

\_\_\_\_\_

**0 5 . 2**

Chloride ions are attracted to the positive electrode.

Complete the half equation for the production of chlorine gas ( $\text{Cl}_2$ ).

**[2 marks]**



0 5 . 3

Hydrogen gas and oxygen gas are produced when sodium sulfate solution is electrolysed.

Explain how oxygen gas is produced in the electrolysis of sodium sulfate solution.

**[4 marks]**

---

---

---

---

---

---

---

---

---

---

---

**8**

**Turn over for the next question**

**Turn over ►**



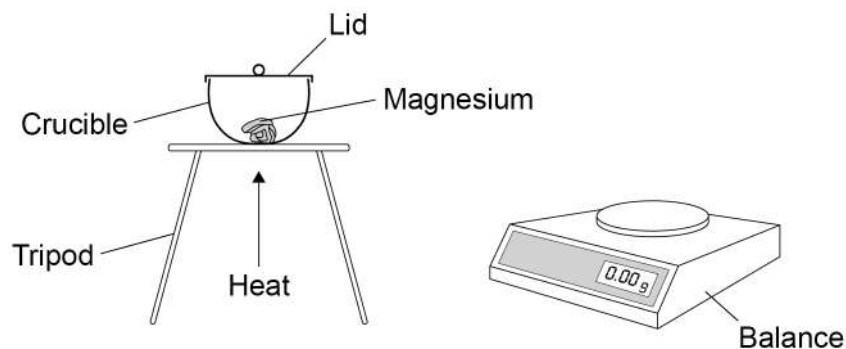
0 6

Metal oxides are produced when metals are heated in air.

A student investigated the change in mass when 0.12 g of magnesium was heated in air.

Figure 5 shows the apparatus.

Figure 5



The student measured the mass of magnesium oxide produced.

0 6

. 1

0.12 g of magnesium reacted to produce 0.20 g of magnesium oxide.

Calculate the number of moles of oxygen gas ( $O_2$ ) that reacted.

Relative atomic mass ( $A_r$ ): O = 16

[3 marks]

---



---



---



---



---

Moles of oxygen gas = \_\_\_\_\_



0 6 . 2

The student repeated the experiment **without** a lid on the crucible.

Suggest why the mass of magnesium oxide produced would be different without a lid on the crucible.

**[2 marks]**

---

---

---

---

0 6 . 3

Copper reacts with oxygen to produce copper oxide.

63.5 g of copper produces 79.5 g of copper oxide.

Calculate the mass of copper oxide produced when 0.50 g of copper reacts with oxygen.

Give your answer to 3 significant figures.

**[3 marks]**

---

---

---

---

Mass (3 significant figures) = \_\_\_\_\_ g

**Question 6 continues on the next page**

**Turn over ►**

0 6 . 4

Iron reacts with oxygen to produce an oxide of iron.

0.015 moles of iron reacts with 0.010 moles of oxygen gas (O<sub>2</sub>).

Determine:

- the formula of the iron oxide produced
- the balanced symbol equation for the reaction.

**[4 marks]**

---

---

---

Formula of iron oxide = \_\_\_\_\_

Balanced symbol equation

---

12



**Turn over for the next question**

*Do not write  
outside the  
box*

**DO NOT WRITE ON THIS PAGE  
ANSWER IN THE SPACES PROVIDED**

**Turn over ►**



0 7

Methane, ethane, propane and butane all react with oxygen to produce carbon dioxide and water.

0 7 . 1

Suggest why a mixture of methane and oxygen does **not** react at room temperature.

Answer in terms of particles.

[2 marks]

---



---



---



---

0 7 . 2

**Table 3** shows the energy released when methane, ethane and propane react with oxygen to produce carbon dioxide and water.

**Table 3**

	Compound reacted with oxygen		
	Methane	Ethane	Propane
Formula of compound	CH <sub>4</sub>	C <sub>2</sub> H <sub>6</sub>	C <sub>3</sub> H <sub>8</sub>
Energy released in kJ/mol	680	1160	1640

Predict the energy released when butane (C<sub>4</sub>H<sub>10</sub>) reacts with oxygen to produce carbon dioxide and water.

[1 mark]

---



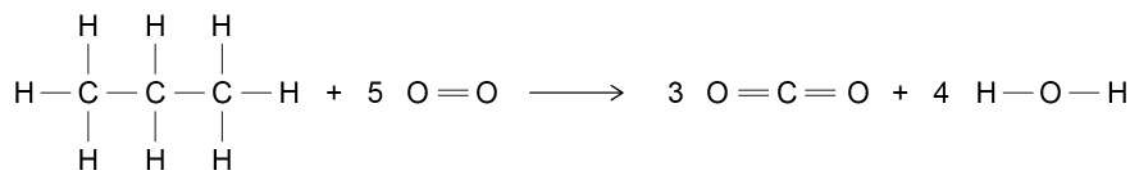
---

Energy released = \_\_\_\_\_ kJ/mol



**0 7 . 3** Propane reacts with oxygen to produce carbon dioxide and water.

The displayed formula equation for the reaction is:



The reaction is exothermic.

In the reaction, the energy released when forming new bonds is 1640 kJ/mol greater than the energy needed when breaking bonds.

**Table 4** shows bond energies.

**Table 4**

Bond	H—C	C—C	O=O	C=O	O—H
Bond energy in kJ/mol	410	X	500	740	460

Calculate the C—C bond energy (X).

[5 marks]

---



---



---



---



---



---



---



---



---



---



---



---



---



---



---



---



---

X = \_\_\_\_\_ kJ/mol

8

END OF QUESTIONS



**There are no questions printed on this page**

*Do not write  
outside the  
box*

**DO NOT WRITE ON THIS PAGE  
ANSWER IN THE SPACES PROVIDED**











Question number	<p style="text-align: center;"><b>Additional page, if required.</b> <b>Write the question numbers in the left-hand margin.</b></p>
	<p>.....</p> <p>.....</p> <p>.....</p> <p>.....</p> <p>.....</p> <p>.....</p> <p>.....</p> <p>.....</p> <p>.....</p> <p>.....</p> <p>.....</p> <p>.....</p> <p>.....</p> <p>.....</p> <p>.....</p> <p>.....</p> <p>.....</p> <p>.....</p> <p>.....</p> <p>.....</p> <p>.....</p> <p>.....</p>
	<p><b>Copyright information</b></p> <p>For confidentiality purposes, all acknowledgements of third-party copyright material are published in a separate booklet. This booklet is published after each live examination series and is available for free download from <a href="http://www.aqa.org.uk">www.aqa.org.uk</a>.</p> <p>Permission to reproduce all copyright material has been applied for. In some cases, efforts to contact copyright-holders may have been unsuccessful and AQA will be happy to rectify any omissions of acknowledgements. If you have any queries please contact the Copyright Team.</p> <p>Copyright © 2021 AQA and its licensors. All rights reserved.</p>

