



Please write clearly in block capitals.

Centre number

--	--	--	--	--

Candidate number

--	--	--	--

Surname

Forename(s)

Candidate signature

I declare this is my own work.

GCSE COMBINED SCIENCE: TRILOGY

H

Higher Tier
Biology Paper 2H

Friday 9 June 2023

Afternoon

Time allowed: 1 hour 15 minutes

Materials

For this paper you must have:

- a ruler
- a scientific calculator.

Instructions

- Use black ink or black ball-point pen.
- Pencil should only be used for drawing.
- Fill in the boxes at the top of this page.
- Answer **all** questions in the spaces provided.
- If you need extra space for your answer(s), use the lined pages at the end of this book. Write the question number against your answer(s).
- Do all rough work in this book. Cross through any work you do not want to be marked.
- In all calculations, show clearly how you work out your answer.

Information

- The maximum mark for this paper is 70.
- The marks for questions are shown in brackets.
- You are expected to use a calculator where appropriate.
- You are reminded of the need for good English and clear presentation in your answers.

For Examiner's Use	
Question	Mark
1	
2	
3	
4	
5	
6	
TOTAL	



J U N 2 3 8 4 6 4 B 2 H 0 1

IB/M/Jun23/E7

8464/B/2H

There are no questions printed on this page

*Do not write
outside the
box*

**DO NOT WRITE ON THIS PAGE
ANSWER IN THE SPACES PROVIDED**



0	1
---	---

Sexual reproduction in humans involves the production of egg cells and sperm cells.

0	1	.	1
---	---	---	---

Name the type of cell division that produces egg cells and sperm cells.

[1 mark]

0	1	.	2
---	---	---	---

Sexual reproduction produces offspring that are genetically different from each other.

Give **two** reasons why sexual reproduction causes variation in the offspring.

[2 marks]

1 _____

2 _____

Question 1 continues on the next page

Turn over ►



Polydactyly is an inherited disorder.

The allele for polydactyly is dominant, **D**.

A person with two copies of the allele **d** will **not** have polydactyly.

0 1 . 3 A person with the genotype **DD** is homozygous.

What word describes the genotype **Dd**?

[1 mark]

0 1 . 4 A person with the genotype **Dd** and a person with the genotype **dd** plan to have a child.

Determine the probability that the child will have polydactyly.

You should:

- complete the Punnett square diagram
- identify any offspring genotype that would have polydactyly.

[5 marks]

Probability that the child will have polydactyly = _____



0 1 . 5 Embryos can be screened for the alleles that cause inherited disorders.

Give **two** advantages of embryo screening.

[2 marks]

1 _____

2 _____

11

Turn over for the next question

Turn over ►



0 2

It is estimated that 99.9% of all species that have ever existed are now extinct.

0 2 . 1

Why is the percentage of species that are extinct only an estimate?

[1 mark]

Tick (✓) **one** box.

All individuals of one species have the same genes.

Extinction is always caused by humans.

Humans have not found evidence of every species.

0 2 . 2

What evidence is used to study species that have become extinct?

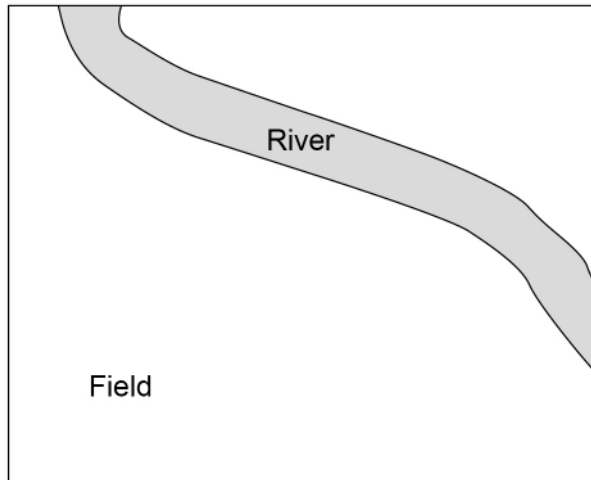
[1 mark]



0 3

Figure 1 shows a river next to a field.

Figure 1



0 3 . 1

Describe a method to investigate how the distance from the river affects the number of different plant species in the field.

You should explain how to use a transect in your method.

[4 marks]

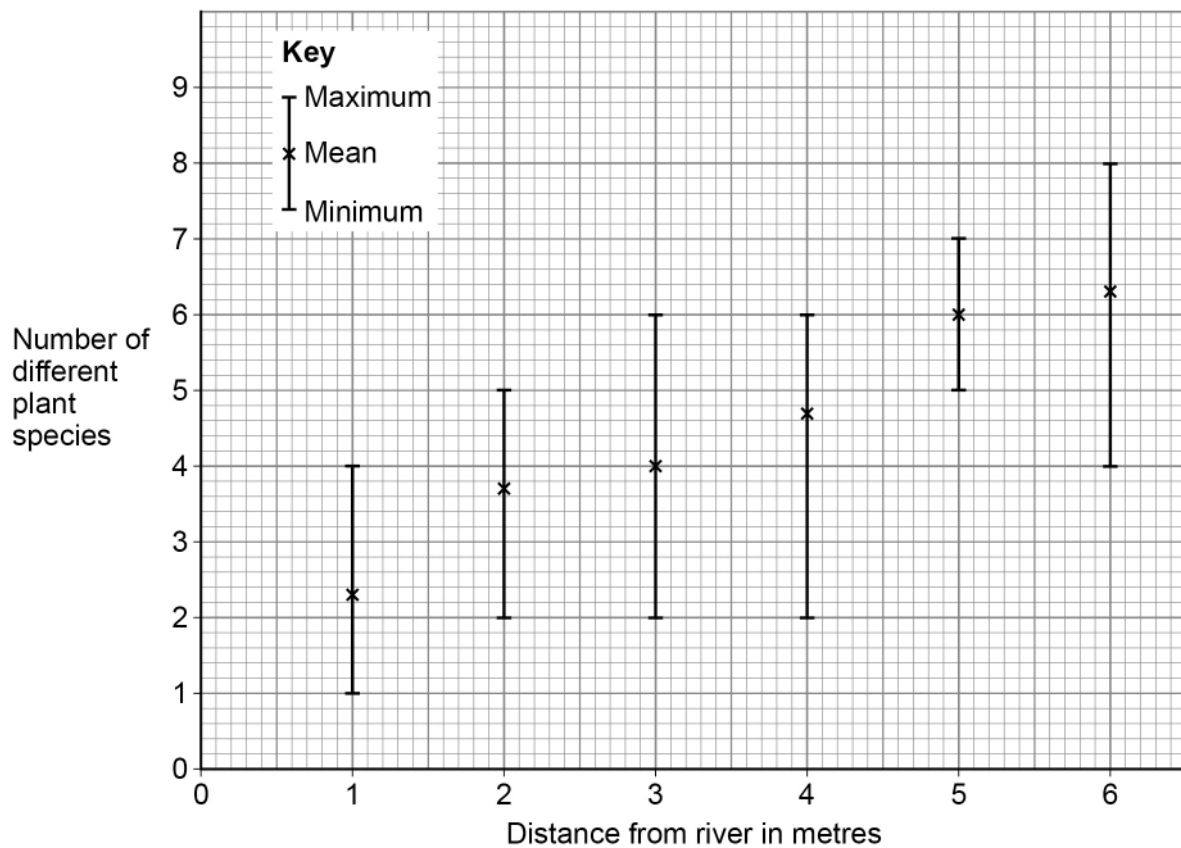


0 3 . 2

Students used a valid method to investigate how the distance from the river affects the number of different plant species in the field.

Figure 2 shows the results.

Figure 2



What is shown by the data in **Figure 2**?

[1 mark]

Tick (✓) **one** box.

Fewer different species are always recorded nearer to the river.

The mean value students can be most certain about is 5 metres from the river.

The number of species recorded 6 metres from the river is anomalous.

Question 3 continues on the next page

Turn over ►



Cows walk on the ground near the river more than they walk on the ground further from the river.

0 3 . 3

Which is an **abiotic** factor that could affect the number of different plant species found near the river?

[1 mark]

Tick (✓) **one** box.

Microorganisms near the roots

Moisture levels in the soil

Oxygen concentration in the air

Primary consumers in the field



0 3 . 4

Increasing numbers of cows are being farmed across the world.

Explain the environmental implications of increasing numbers of cows being farmed.

[6 marks]

12

Turn over for the next question

Turn over ►

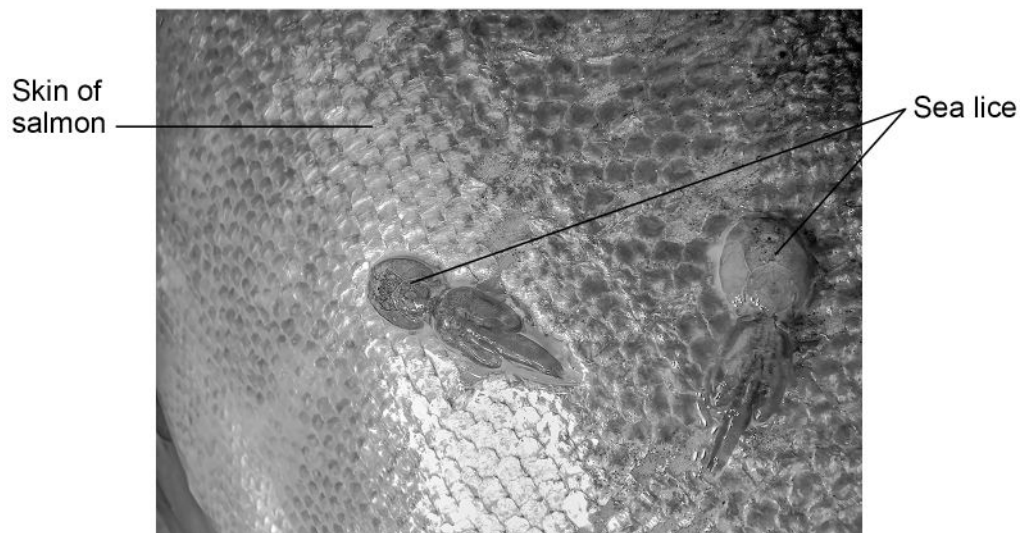


0 4

Sea lice are small animals that feed on the skin and blood of salmon fish.

Figure 3 shows sea lice attached to the skin of a salmon, *Oncorhynchus keta*.

Figure 3



0 4 . 1

What is the genus name of salmon?

[1 mark]

0 4 . 2

Which domain are sea lice classified in?

[1 mark]



0 4 . 3

Some salmon have genes that result in fewer sea lice attaching to the skin.

Describe how fish farmers can selectively breed salmon that sea lice **cannot** attach to.

[3 marks]

0 4 . 4

Explain the advantages to salmon farmers of producing salmon that do **not** have sea lice attached to their skin.

[3 marks]

Question 4 continues on the next page

Turn over ►



0 4 . 5 Explain the **disadvantage** of selectively breeding salmon.

Do **not** refer to cost or to time in your answer.

[2 marks]

10



0 5

In Vitro Fertilisation (IVF) can be used to treat infertility.

0 5 . 1

Which hormones are given to women having IVF treatment?

[1 mark]Tick (✓) **one** box.

FSH and LH

FSH and oestrogen

LH and oestrogen

0 5 . 2

Name the target organ of the hormones used for IVF.

[1 mark]

0 5 . 3

Describe why microscopes are needed in the process of IVF.

[1 mark]

Question 5 continues on the next page**Turn over ►**

0 5 . 4

Describe how the hormones given to women during IVF treatment **interact** with other hormones to prepare the body for pregnancy.

[3 marks]

Scientists studied women who had IVF treatment.

Table 1 shows the results.

Table 1

	Number of women
Received IVF treatment	450
Successful IVF treatment	135



0 5 . 5

Calculate the **simplest** ratio of the number of women who had successful IVF to the number of women who had unsuccessful IVF.

Give the ratio in whole numbers.

[2 marks]

Ratio (whole numbers) = _____ : _____

0 5 . 6

Suggest **one** factor that can affect the probability of a woman having a child as a result of IVF treatment.

[1 mark]

0 5 . 7

Give **two** arguments against the use of IVF treatment.

Do **not** refer to cost or to religion in your answer.

[2 marks]

1 _____

2 _____

11

Turn over ►



There are no questions printed on this page

*Do not write
outside the
box*

**DO NOT WRITE ON THIS PAGE
ANSWER IN THE SPACES PROVIDED**



0 6

The control of body temperature is an example of homeostasis.

0 6 . 1

Give **one** other internal condition controlled by homeostasis.

Do **not** refer to temperature in your answer.

[1 mark]

0 6 . 2

Explain why the control of body temperature is important.

[2 marks]

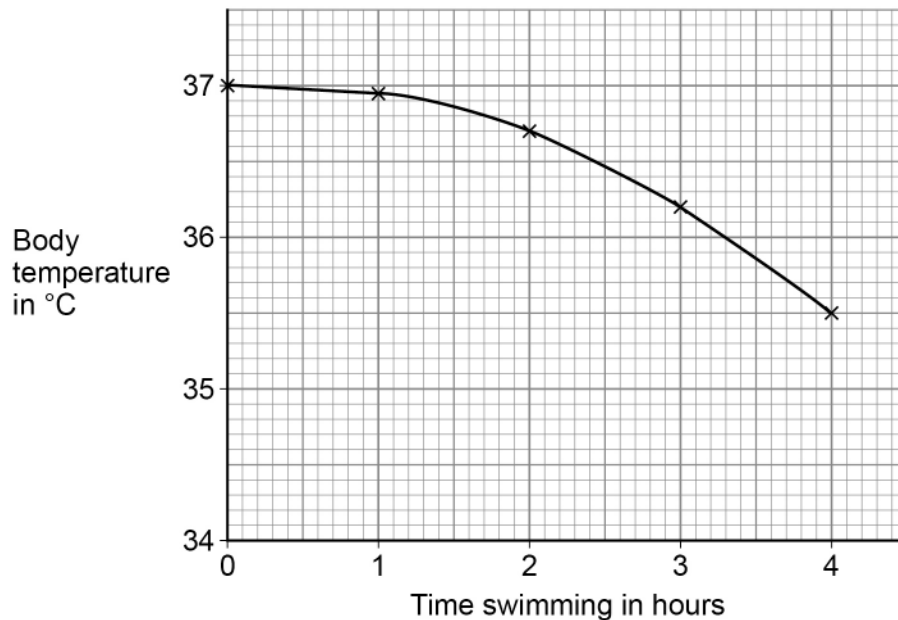
Question 6 continues on the next page

Turn over ►

The body temperature of long-distance swimmers can change as the length of time swimming in cold water increases.

Figure 4 shows how the body temperature of one swimmer changed in the first 4 hours of a long-distance swim.

Figure 4



0 6 . 3

Calculate the mean rate of body temperature decrease per hour in the first 4 hours of the swim.

[2 marks]

Rate = _____ °C per hour



0 6 . 4 Hypothermia is a dangerously low body temperature.

For this swimmer, a 5.5% decrease in body temperature from the start of the swim will cause hypothermia.

Determine the body temperature at which this swimmer will start to have hypothermia.

Give your answer to 2 significant figures.

[4 marks]

Body temperature (2 significant figures) = _____ °C

Question 6 continues on the next page

Turn over ►



A decrease in body temperature causes the adrenal glands and the thyroid gland to be stimulated.

0 6 . 5

Which gland secretes hormones to stimulate the adrenal glands?

[1 mark]

0 6 . 6

Explain the role of the adrenal glands in responding to a decrease in body temperature.

[5 marks]



06.7

Explain how the thyroid gland controls the response to a decrease in body temperature by negative feedback.

[3 marks]

18**END OF QUESTIONS**

There are no questions printed on this page

*Do not write
outside the
box*

**DO NOT WRITE ON THIS PAGE
ANSWER IN THE SPACES PROVIDED**



There are no questions printed on this page

*Do not write
outside the
box*

**DO NOT WRITE ON THIS PAGE
ANSWER IN THE SPACES PROVIDED**

Copyright information

For confidentiality purposes, all acknowledgements of third-party copyright material are published in a separate booklet. This booklet is published after each live examination series and is available for free download from www.aqa.org.uk.

Permission to reproduce all copyright material has been applied for. In some cases, efforts to contact copyright-holders may have been unsuccessful and AQA will be happy to rectify any omissions of acknowledgements. If you have any queries please contact the Copyright Team.

Copyright © 2023 AQA and its licensors. All rights reserved.



2 8



2 3 6 G 8 4 6 4 / B / 2 H

IB/M/Jun23/8464/B/2H